


2C1 Further Maths



Niels R. Walet

2C1: Further Mathematical Methods

Niels Walet, Fall 2002

Version: October 23, 2002

Copyright by Niels R. Walet, Dept of Physics, UMIST
Copying for personal or study use permitted
Copying for commercial use or profit disallowed

Contents

1	Introduction	7
1.1	Ordinary differential equations	7
1.2	PDE's	7
2	Classification of partial differential equations.	11
3	Boundary and Initial Conditions	15
3.1	Explicit boundary conditions	16
3.1.1	Dirichlet boundary condition	16
3.1.2	von Neumann boundary conditions	16
3.1.3	Mixed (Robin's) boundary conditions	17
3.2	Implicit boundary conditions	17
3.3	A slightly more realistic example	17
3.3.1	A string with fixed endpoints	17
3.3.2	A string with freely floating endpoints	17
3.3.3	A string with endpoints fixed to strings	18
4	Fourier Series	21
4.1	Taylor series	21
4.2	Introduction to Fourier Series	21
4.3	Periodic functions	22
4.4	Orthogonality and normalisation	22
4.5	When is it a Fourier series?	23
4.6	Fourier series for even and odd functions	25
4.7	Convergence of Fourier series	26
5	Separation of variables on rectangular domains	29
5.1	Cookbook	29
5.2	parabolic equation	30
5.3	hyperbolic equation	31
5.4	Laplace's equation	33
5.5	More complex initial/boundary conditions	34
5.6	Inhomogeneous equations	36
6	D'Alembert's solution to the wave equation	39
7	Polar and spherical coordinate systems	45
7.1	Polar coordinates	45
7.2	spherical coordinates	46
8	Separation of variables in polar coordinates	51

9 Series solutions of O.D.E.	55
9.1 Singular points	56
9.2 *Special cases	57
9.2.1 Two equal roots	57
9.2.2 Two roots differing by an integer	57
9.2.3 Example 1	58
9.2.4 Example 2	59
10 Bessel functions	61
10.1 Temperature on a disk	61
10.2 Bessel's equation	62
10.3 Gamma function	64
10.4 Bessel functions of general order	65
10.5 Properties of Bessel functions	66
10.6 Sturm-Liouville theory	67
10.7 Our initial problem and Bessel functions	69
10.8 Fourier-Bessel series	70
10.9 Back to our initial problem	72
11 Separation of variables in three dimensions	73
11.1 Modelling the eye	73
11.2 Properties of Legendre polynomials	75
11.2.1 Generating function	75
11.2.2 Rodrigues' Formula	76
11.2.3 A table of properties	76
11.3 Fourier-Legendre series	77
11.4 Modelling the eye—revisited	78

Chapter 1

Introduction

In this course we shall consider so-called *linear* Partial Differential Equations (*P.D.E.*'s). This chapter is intended to give a short definition of such equations, and a few of their properties. However, before introducing a new set of definitions, let me remind you of the so-called ordinary differential equations (*O.D.E.*'s) you have encountered in many physical problems.

1.1 Ordinary differential equations

ODE's are equations involving an unknown function and its derivatives, where the function depends on a single variable, e.g., the equation for a particle moving at constant velocity,

$$\frac{d}{dt}x(t) = v, \quad (1.1)$$

which has the well known solution

$$x(t) = vt + x_0. \quad (1.2)$$

The unknown constant x_0 is called an integration constant, and can be determined if we know where the particle is located at time $t = 0$. If we go to a second order equation (i.e., one containing the second derivative of the unknown function), we find more integration constants: the harmonic oscillator equation

$$\frac{d^2}{dt^2}x(t) = -\omega^2x(t) \quad (1.3)$$

has as solution

$$x = A \cos \omega t + B \sin \omega t, \quad (1.4)$$

which contains **two** constants.

As we can see from the simple examples, and as you well know from experience, these equations are relatively straightforward to solve in general form. We need to know only the coordinate and position at one time to fix all constants.

1.2 PDE's

Rather than giving a strict mathematical definition, let us look at an example of a PDE, the heat equation in 1 space dimension

$$\frac{\partial^2 u(x, t)}{\partial x^2} = \frac{1}{k} \frac{\partial u(x, t)}{\partial t}. \quad (1.5)$$

- It is a PDE since *partial* derivatives are involved.

To remind you of what that means: $\frac{\partial u(x,t)}{\partial x}$ denotes the differentiation of $u(x,t)$ w.r.t. x keeping t fixed,

$$\frac{\partial(x^2t + xt^2)}{\partial x} = 2xt + t^2. \quad (1.6)$$

- It is called linear since u and its derivatives appear linearly, i.e., once per term. No functions of u are allowed. Terms like u^2 , $\sin(u)$, $u\frac{\partial u}{\partial x}$, etc., break this rule, and lead to *non-linear* equations. These are interesting and important in their own right, but outside the scope of this course.
- Equation (1.5) above is also homogeneous (which just means that every term involves either u or one of its derivatives, there is no term that does not contain u). The equation

$$\frac{\partial^2 u(x,t)}{\partial x^2} = \frac{1}{k} \frac{\partial u(x,t)}{\partial t} + \sin(x) \quad (1.7)$$

is called inhomogeneous, due to the $\sin(x)$ term on the right, that is independent of u .

Why is all that so important? A linear homogeneous equation allows superposition of solutions. If u_1 and u_2 are both solutions to the heat equation,

$$\frac{\partial^2 u_1(x,t)}{\partial x^2} - \frac{1}{k} \frac{\partial u_1(x,t)}{\partial t} = \frac{\partial^2 u_2(x,t)}{\partial x^2} - \frac{1}{k} \frac{\partial u_2(x,t)}{\partial t} = 0, \quad (1.8)$$

any combination is also a solution,

$$\frac{\partial^2 [au_1(x,t) + bu_2(x,t)]}{\partial x^2} - \frac{1}{k} \frac{\partial [au_1(x,t) + bu_2(x,t)]}{\partial t} = 0. \quad (1.9)$$

For a linear inhomogeneous equation this gets somewhat modified. Let v be *any* solution to the heat equation with a $\sin(x)$ inhomogeneity,

$$\frac{\partial^2 v(x,t)}{\partial x^2} - \frac{1}{k} \frac{\partial v(x,t)}{\partial t} = \sin(x). \quad (1.10)$$

In that case $v + au_1$, with u_1 a solution to the homogeneous equation, see Eq. (1.8), is also a solution,

$$\begin{aligned} & \frac{\partial^2 [v(x,t) + au_1(x,t)]}{\partial x^2} - \frac{1}{k} \frac{\partial [v(x,t) + au_1(x,t)]}{\partial t} = \\ & \frac{\partial^2 v(x,t)}{\partial x^2} - \frac{1}{k} \frac{\partial v(x,t)}{\partial t} + a \left(\frac{\partial^2 u_1(x,t)}{\partial x^2} - \frac{1}{k} \frac{\partial u_1(x,t)}{\partial t} \right) = \sin(x). \end{aligned} \quad (1.11)$$

Finally we would like to define the order of a PDE as the power in the highest derivative, even it is a mixed derivative (w.r.t. more than one variable).

Quiz Which of these equations is linear? and which is homogeneous?

a)
$$\frac{\partial^2 u}{\partial x^2} + x^2 \frac{\partial u}{\partial y} = x^2 + y^2. \quad (1.12)$$

b)
$$y^2 \frac{\partial^2 u}{\partial x^2} + u \frac{\partial u}{\partial x} + x^2 \frac{\partial^2 u}{\partial y^2} = 0. \quad (1.13)$$

c)
$$\left(\frac{\partial u}{\partial x}\right)^2 + \frac{\partial^2 u}{\partial y^2} = 0. \quad (1.14)$$

What is the order of the following equations?

a)
$$\frac{\partial^3 u}{\partial x^3} + \frac{\partial^2 u}{\partial y^2} = 0. \quad (1.15)$$

b)
$$\frac{\partial^2 u}{\partial x^2} - 2\frac{\partial^4 u}{\partial x^3 \partial y} + \frac{\partial^2 u}{\partial y^2} = 0. \quad (1.16)$$

Chapter 2

Classification of partial differential equations.

Partial differential equations occur in many different areas of physics, chemistry and engineering. Let me give a few examples, with their physical context. Here, as is common practice, I shall write ∇^2 to denote the sum

$$\nabla^2 = \frac{\partial^2}{\partial x^2} + \frac{\partial^2}{\partial y^2} + \dots \quad (2.1)$$

- The wave equation, $\nabla^2 u = \frac{1}{c^2} \frac{\partial^2 u}{\partial t^2}$.
This can be used to describe the motion of a string or drumhead (u is vertical displacement), as well as a variety of other waves (sound, light, ...). The quantity c is the speed of wave propagation.
- The heat or diffusion equation, $\nabla^2 u = \frac{1}{k} \frac{\partial u}{\partial t}$.
This can be used to describe the change in temperature (u) in a system conducting heat, or the diffusion of one substance in another (u is concentration). The quantity k , sometimes replaced by a^2 , is the diffusion constant, or the heat capacity. Notice the irreversible nature: If $t \rightarrow -t$ the wave equation turns into itself, but not the diffusion equation.
- Laplace's equation $\nabla^2 u = 0$.
- Helmholtz's equation $\nabla^2 u + \lambda u = 0$.
This occurs for waves in wave guides, when searching for eigenmodes (resonances).
- Poisson's equation $\nabla^2 u = f(x, y, \dots)$.
The equation for the gravitational field inside a gravitational body, or the electric field inside a charged sphere.
- Time-independent Schrödinger equation, $\nabla^2 u = \frac{2m}{\hbar^2} [E - V(x, y, \dots)] u = 0$.
 $|u|^2$ has a probability interpretation.
- Klein-Gordon equation $\nabla^2 u - \frac{1}{c^2} \frac{\partial^2 u}{\partial t^2} + \lambda^2 u = 0$.
Relativistic quantum particles,
 $|u|^2$ has a probability interpretation.

These are all second order differential equations. (Remember that the order is defined as the highest derivative appearing in the equation.)

Second order P.D.E. are usually divided into three types. Let me show this for two-dimensional PDE's:

$$a \frac{\partial^2 u}{\partial x^2} + 2c \frac{\partial^2 u}{\partial x \partial y} + b \frac{\partial^2 u}{\partial y^2} + d \frac{\partial u}{\partial x} + e \frac{\partial u}{\partial y} + fu + g = 0 \quad (2.2)$$

where a, \dots, g can either be constants or given functions of x, y . If g is 0 the system is called homogeneous, otherwise it is called inhomogeneous. Now the differential equation is said to be

$$\left. \begin{array}{l} \text{elliptic} \\ \text{hyperbolic} \\ \text{parabolic} \end{array} \right\} \text{ if } \Delta(x, y) = ab - c^2 \text{ is } \left\{ \begin{array}{l} \text{positive} \\ \text{negative} \\ \text{zero} \end{array} \right. \quad (2.3)$$

Why do we use these names? The idea is most easily explained for a case with constant coefficients, and correspond to a classification of the associated quadratic form (replace derivative w.r.t. x and y with ξ and η)

$$a\xi^2 + b\eta^2 + 2c\xi\eta + f = 0. \quad (2.4)$$

We neglect d and e since they only describe a shift of the origin. Such a quadratic equation can describe any of the geometrical figures discussed above. Let me show an example, $a = 3, b = 3, c = 1$ and $f = -3$. Since $ab - c^2 = 8$, this should describe an ellipse. We can write

$$3\xi^2 + 3\eta^2 + 2\xi\eta = 4\left(\frac{\xi + \eta}{\sqrt{2}}\right)^2 + 2\left(\frac{\xi - \eta}{\sqrt{2}}\right)^2 = 3, \quad (2.5)$$

which is indeed the equation of an ellipse, with rotated axes, as can be seen in Fig. 2.1,

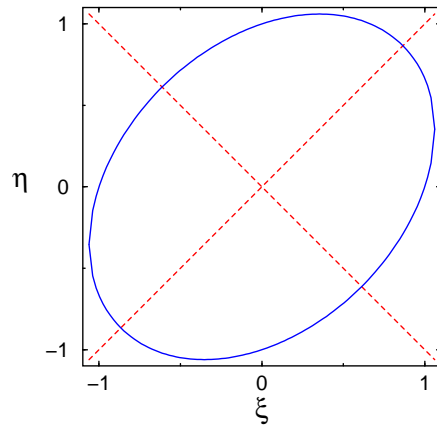


Figure 2.1: The ellipse corresponding to Eq. (2.5)

We should also realize that Eq. (2.5) can be written in the vector-matrix-vector form

$$(\xi, \eta) \begin{pmatrix} 3 & 1 \\ 1 & 3 \end{pmatrix} \begin{pmatrix} \xi \\ \eta \end{pmatrix} = 3. \quad (2.6)$$

We now recognise that Δ is nothing more than the determinant of this matrix, and it is positive if both eigenvalues are equal, negative if they differ in sign, and zero if one of them is zero. (Note: the simplest ellipse corresponds to $x^2 + y^2 = 1$, a parabola to $y = x^2$, and a hyperbola to $x^2 - y^2 = 1$)

Quiz What is the order of the following equations

$$\text{a} \quad \frac{\partial^3 u}{\partial x^3} + \frac{\partial^2 u}{\partial y^2} = 0 \quad (2.7)$$

$$\text{b} \quad \frac{\partial^2 u}{\partial x^2} - 2 \frac{\partial^4 u}{\partial x^3 u} + \frac{\partial^2 u}{\partial y^2} = 0 \quad (2.8)$$

Classify the following differential equations (as elliptic, etc.)

$$\text{a} \quad \frac{\partial^2 u}{\partial x^2} - 2 \frac{\partial^2 u}{\partial x \partial y} + \frac{\partial^2 u}{\partial y^2} = 0$$

$$\text{b} \quad \frac{\partial^2 u}{\partial x^2} + \frac{\partial^2 u}{\partial y^2} + \frac{\partial u}{\partial x} = 0$$

$$\text{c} \quad \frac{\partial^2 u}{\partial x^2} - \frac{\partial^2 u}{\partial y^2} + 2 \frac{\partial u}{\partial x} = 0$$

$$\text{d} \quad \frac{\partial^2 u}{\partial x^2} + \frac{\partial u}{\partial x} + 2 \frac{\partial u}{\partial y} = 0$$

$$\text{d} \quad y \frac{\partial^2 u}{\partial x^2} + x \frac{\partial^2 u}{\partial y^2} = 0$$

In more than two dimensions we use a similar definition, based on the fact that all eigenvalues of the coefficient matrix have the same sign (for an elliptic equation), have different signs (hyperbolic) or one of them is zero (parabolic). This has to do with the behaviour along the characteristics, as discussed below.

Let me give a slightly more complex example

$$x^2 \frac{\partial^2 u}{\partial x^2} + y^2 \frac{\partial^2 u}{\partial y^2} + z^2 \frac{\partial^2 u}{\partial z^2} + 2xy \frac{\partial^2 u}{\partial x \partial y} + 2xz \frac{\partial^2 u}{\partial x \partial z} + 2yz \frac{\partial^2 u}{\partial y \partial z} = 0. \quad (2.9)$$

The matrix associated with this equation is

$$\begin{pmatrix} x^2 & xy & xz \\ xy & y^2 & yz \\ xz & yz & z^2 \end{pmatrix} \quad (2.10)$$

If we evaluate its characteristic polynomial we find that it is

$$\lambda^2(x^2 - y^2 + z^2 - \lambda) = 0. \quad (2.11)$$

Since this has always (for all x, y, z) two zero eigenvalues this is a parabolic differential equation.

Characteristics and classification A key point for classifying the equations this way is not that we like the conic sections so much, but that the equations behave in very different ways if we look at the three different cases. Pick the simplest representative case for each class:

(2.12)

Chapter 3

Boundary and Initial Conditions

As you all know, solutions to ordinary differential equations are usually not unique (integration constants appear in many places). This is of course equally a problem for PDE's. PDE's are usually specified through a set of boundary or initial conditions. A boundary condition expresses the behaviour of a function on the boundary (border) of its area of definition. An initial condition is like a boundary condition, but then for the time-direction. Not all boundary conditions allow for solutions, but usually the physics suggests what makes sense. Let me remind you of the situation for ordinary differential equations, one you should all be familiar with, a particle under the influence of a constant force,

$$\frac{d^2x}{dt^2} = a. \quad (3.1)$$

Which leads to

$$\frac{dx}{dt} = at + v_0, \quad (3.2)$$

and

$$x = \frac{1}{2}at^2 + v_0t + x_0. \quad (3.3)$$

This contains two integration constants. Standard practice would be to specify $\frac{\partial x}{\partial t}(t=0) = v_0$ and $x(t=0) = x_0$. These are **linear** initial conditions (linear since they only involve x and its derivatives linearly), which have at most a first derivative in them. This one order difference between boundary condition and equation persists to PDE's. It is kind of obviously that since the equation already involves that derivative, we can not specify the same derivative in a different equation.

The important difference between the arbitrariness of integration constants in PDE's and ODE's is that whereas solutions of ODE's these are really constants, solutions of PDE's contain arbitrary functions.

Let me give an example. Take

$$u = yf(x) \quad (3.4)$$

then

$$\frac{\partial u}{\partial y} = f(x). \quad (3.5)$$

This can be used to eliminate f from the first of the equations, giving

$$u = y \frac{\partial u}{\partial y} \quad (3.6)$$

which has the general solution $u = yf(x)$.

One can construct more complicated examples. Consider

$$u(x, y) = f(x + y) + g(x - y) \quad (3.7)$$

which gives on double differentiation

$$\frac{\partial^2 u}{\partial x^2} - \frac{\partial^2 u}{\partial y^2} = 0. \quad (3.8)$$

The problem is that without additional conditions the arbitrariness in the solutions makes it almost useless (if possible) to write down the general solution. We need additional conditions, that reduce this freedom. In most physical problems these are boundary conditions, that describes how the system behaves on its boundaries (for all times) and initial conditions, that specify the state of the system for an initial time $t = 0$. In the ODE problem discussed before we have two initial conditions (velocity and position at time $t = 0$).

3.1 Explicit boundary conditions

For the problems of interest here we shall only consider linear boundary conditions, which express a linear relation between the function and its partial derivatives, e.g.,

$$u(x, y = 0) + x \frac{\partial u}{\partial x}(x, y = 0) = 0. \quad (3.9)$$

As before the maximal order of the derivative in the boundary condition is one order lower than the order of the PDE. For a second order differential equation we have three possible types of boundary condition

3.1.1 Dirichlet boundary condition

When we specify the value of u on the boundary, we speak of Dirichlet boundary conditions. An example for a vibrating string with its ends, at $x = 0$ and $x = L$, fixed would be

$$u(0, t) = u(L, t) = 0. \quad (3.10)$$

3.1.2 von Neumann boundary conditions

In multidimensional problems the derivative of a function w.r.t. to each of the variables forms a vector field (i.e., a function that takes a vector value at each point of space), usually called the gradient. For three variables this takes the form

$$\text{grad}f(x, y, z) = \nabla f(x, y, z) = \left(\frac{\partial f}{\partial x}(x, y, z), \frac{\partial f}{\partial y}(x, y, z), \frac{\partial f}{\partial z}(x, y, z) \right). \quad (3.11)$$

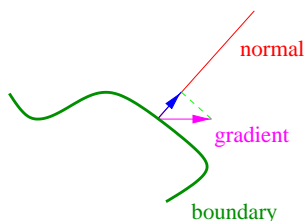


Figure 3.1: A sketch of the normal derivatives used in the von Neumann boundary conditions.

Typically we cannot specify the gradient at the boundary, since that is too restrictive to allow for solutions. We can – and in physical problems often need to – specify the component normal to the boundary, see Fig. 3.1 for an example. When this normal derivative is specified we speak of von Neumann boundary conditions.

In the case of an insulated (infinitely thin) rod of length a , we can not have a heat-flux beyond the ends so that the gradient of the temperature must vanish (heat can only flow where a difference in temperature exists). This leads to the BC

$$\frac{\partial u}{\partial x}(0, t) = \frac{\partial u}{\partial x}(a, t) = 0. \quad (3.12)$$

3.1.3 Mixed (Robin's) boundary conditions

We can of course mix Dirichlet and von Neumann boundary conditions. For the thin rod example given above we could require

$$u(0, t) + \frac{\partial u}{\partial x}(0, t) = u(a, t) + \frac{\partial u}{\partial x}(a, t) = 0. \quad (3.13)$$

3.2 Implicit boundary conditions

In many physical problems we have implicit boundary conditions, which just mean that we have certain conditions we wish to be satisfied. This is usually the case for systems defined on an infinite definition area. For the case of the Schrödinger equation this usually means that we require the wave function to be normalisable. We thus have to disallow the wave function blowing up at infinity. Sometimes we implicitly assume continuity or differentiability. In general one should be careful about such implicit BC's, which may be extremely important

3.3 A slightly more realistic example

3.3.1 A string with fixed endpoints

Consider a string fixed at $x = 0$ and $x = a$, as in Fig. 3.2

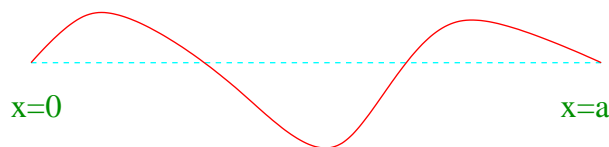


Figure 3.2: A string with fixed endpoints.

It satisfies the wave equation

$$\frac{1}{c^2} \frac{\partial^2 u}{\partial t^2} = \frac{\partial^2 u}{\partial x^2}, \quad 0 < x < a, \quad (3.14)$$

with boundary conditions

$$u(0, t) = u(a, t) = 0, \quad t > 0, \quad (3.15)$$

and initial conditions,

$$u(x, 0) = f(x), \quad \frac{\partial u}{\partial x}(x, 0) = g(x). \quad (3.16)$$

3.3.2 A string with freely floating endpoints

Consider a string with ends fastened to air bearings that are fixed to a rod orthogonal to the x -axis. Since the bearings float freely there should be no force along the rods, which means that the string is horizontal at the bearings, see Fig. 3.3 for a sketch.

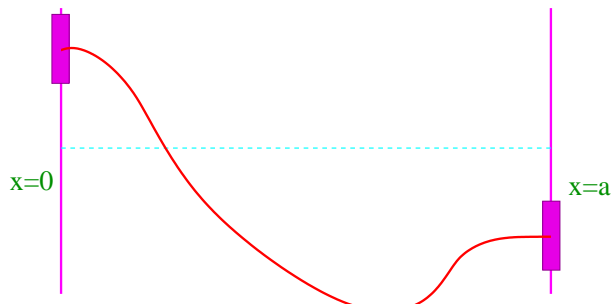


Figure 3.3: A string with floating endpoints.

It satisfies the wave equation with the same initial conditions as above, but the boundary conditions now are

$$\frac{\partial u}{\partial x}(0, t) = \frac{\partial u}{\partial x}(a, t) = 0, \quad t > 0. \quad (3.17)$$

These are clearly of von Neumann type.

3.3.3 A string with endpoints fixed to strings

To illustrate mixed boundary conditions we make an even more complicated contraption where we fix the endpoints of the string to springs, with equilibrium at $y = 0$, see Fig. 3.4 for a sketch.

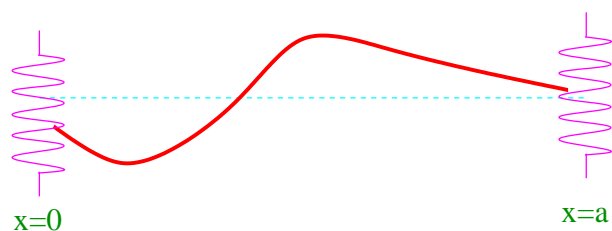


Figure 3.4: A string with endpoints fixed to springs.

Hook's law states that the force exerted by the spring (along the y axis) is $F = -ku(0, t)$, where k is the spring constant. This must be balanced by the force the string on the spring, which is equal to the tension T in the string. The component parallel to the y axis is $T \sin \alpha$, where α is the angle with the horizontal, see Fig. 3.5.

For small α we have $\sin \alpha \approx \tan \alpha = \frac{\partial u}{\partial x}(0, t)$. Since both forces should cancel we find

$$u(0, t) - \frac{T}{k} \frac{\partial u}{\partial x}(0, t) = 0, \quad t > 0, \quad (3.18)$$

and

$$u(a, t) - \frac{T}{k} \frac{\partial u}{\partial x}(a, t) = 0, \quad t > 0. \quad (3.19)$$

These are mixed boundary conditions.

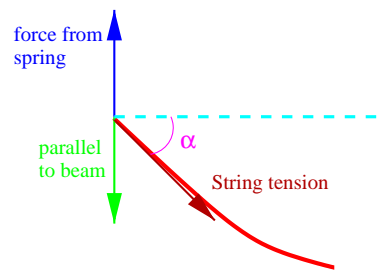


Figure 3.5: the balance of forces at one endpoint of the string of Fig. 3.4.

Chapter 4

Fourier Series

In this chapter we shall discuss Fourier series. These infinite series occur in many different areas of physics, in electromagnetic theory, electronics, wave phenomena and many others. They have some similarity to – but are very different from – the Taylor’s series you have encountered before.

4.1 Taylor series

One series you have encountered before is Taylor’s series,

$$f(x) = \sum_{n=0}^{\infty} f^{(n)}(a) \frac{(x-a)^n}{n!}, \quad (4.1)$$

where $f^{(n)}(x)$ is the n th derivative of f . An example is the Taylor series of the cosine around $x = 0$ (i.e., $a = 0$),

$$\begin{aligned} \cos(0) &= 1, \\ \cos'(x) &= -\sin(x), & \cos'(0) &= 0, \\ \cos^{(2)}(x) &= -\cos(x), & \cos^{(2)}(0) &= -1, \\ \cos^{(3)}(x) &= \sin(x), & \cos^{(3)}(0) &= 0, \\ \cos^{(4)}(x) &= \cos(x), & \cos^{(4)}(0) &= 1. \end{aligned} \quad (4.2)$$

Notice that after four steps we are back where we started. We have thus found (using $m = 2n$ in (4.1)))

$$\cos x = \sum_{m=0}^{\infty} \frac{(-1)^m}{(2m)!} x^{2m}, \quad (4.3)$$

Question: Show that

$$\sin x = \sum_{m=0}^{\infty} \frac{(-1)^m}{(2m+1)!} x^{2m+1}. \quad (4.4)$$

4.2 Introduction to Fourier Series

Rather than Taylor series, that are supposed to work for “any” function, we shall study periodic functions. For periodic functions the French mathematician introduced a series in terms of sines and cosines,

$$f(x) = \frac{a_0}{2} + \sum_{n=1}^{\infty} [a_n \cos(nx) + b_n \sin(nx)]. \quad (4.5)$$

We shall study how and when a function can be described by a Fourier series. One of the very important differences with Taylor series is that they can be used to approximate non-continuous functions as well as continuous ones.

4.3 Periodic functions

We first need to define a periodic function. A function is called periodic with period p if $f(x+p) = f(x)$, for all x , even if f is not defined everywhere. A simple example is the function $f(x) = \sin(bx)$ which is periodic with period $(2\pi)/b$. Of course it is also periodic with periodic $(4\pi)/b$. In general a function with period p is periodic with period $2p, 3p, \dots$. This can easily be seen using the definition of periodicity, which subtracts p from the argument

$$f(x+3p) = f(x+2p) = f(x+p) = f(x). \quad (4.6)$$

The smallest positive value of p for which f is periodic is called the (primitive) period of f .

Question: What is the primitive period of $\sin(4x)$?

Answer: $\pi/2$.

4.4 Orthogonality and normalisation

Consider the series

$$\frac{a_0}{2} + \sum_{n=1} [a_n \cos\left(\frac{n\pi x}{L}\right) + b_n \sin\left(\frac{n\pi x}{L}\right)], \quad -L \leq x \leq L. \quad (4.7)$$

This is called a trigonometric series. If the series approximates a function f (as will be discussed) it is called a Fourier series and a and b are the Fourier coefficients of f .

In order for all of this to make sense we first study the functions

$$\left\{1, \cos\left(\frac{n\pi x}{L}\right), \sin\left(\frac{n\pi x}{L}\right)\right\}, \quad n = 1, 2, \dots, \quad (4.8)$$

and especially their properties under integration. We find that

$$\int_{-L}^L 1 \cdot 1 \, dx = 2L, \quad (4.9)$$

$$\int_{-L}^L 1 \cdot \cos\left(\frac{n\pi x}{L}\right) \, dx = 0, \quad (4.10)$$

$$\int_{-L}^L 1 \cdot \sin\left(\frac{n\pi x}{L}\right) \, dx = 0, \quad (4.11)$$

$$\begin{aligned} \int_{-L}^L \cos\left(\frac{m\pi x}{L}\right) \cdot \cos\left(\frac{n\pi x}{L}\right) \, dx &= \frac{1}{2} \int_{-L}^L \cos\left(\frac{(m+n)\pi x}{L}\right) + \cos\left(\frac{(m-n)\pi x}{L}\right) \, dx \\ &= \begin{cases} 0 & \text{if } n \neq m \\ L & \text{if } n = m \end{cases}, \end{aligned} \quad (4.12)$$

$$\begin{aligned} \int_{-L}^L \sin\left(\frac{m\pi x}{L}\right) \cdot \sin\left(\frac{n\pi x}{L}\right) \, dx &= \frac{1}{2} \int_{-L}^L -\cos\left(\frac{(m+n)\pi x}{L}\right) + \cos\left(\frac{(m-n)\pi x}{L}\right) \, dx \\ &= \begin{cases} 0 & \text{if } n \neq m \\ L & \text{if } n = m \end{cases}, \end{aligned} \quad (4.13)$$

$$\begin{aligned} \int_{-L}^L \cos\left(\frac{m\pi x}{L}\right) \cdot \sin\left(\frac{n\pi x}{L}\right) \, dx &= \frac{1}{2} \int_{-L}^L \sin\left(\frac{(m+n)\pi x}{L}\right) + \sin\left(\frac{(m-n)\pi x}{L}\right) \, dx \\ &= 0. \end{aligned} \quad (4.14)$$

If we consider these integrals as some kind of inner product between functions (like the standard vector inner product) we see that we could call these functions *orthogonal*. This is indeed standard practice, where for functions the *general* definition of inner product takes the form

$$(f, g) = \int_a^b w(x)f(x)g(x) dx. \quad (4.15)$$

If this is zero we say that the functions f and g are orthogonal on the interval $[a, b]$ with weight function w . If this function is 1, as is the case for the trigonometric functions, we just say that the functions are orthogonal on $[a, b]$.

The norm of a function is now defined as the square root of the inner-product of a function with itself (again, as in the case of vectors),

$$\|f\| = \sqrt{\int_a^b w(x)f(x)^2 dx}. \quad (4.16)$$

If we define a normalised form of f (like a unit vector) as $f/\|f\|$, we have

$$\|(f/\|f\|)\| = \sqrt{\frac{\int_a^b w(x)f(x)^2 dx}{\|f\|^2}} = \frac{\sqrt{\int_a^b w(x)f(x)^2 dx}}{\|f\|} = \frac{\|f\|}{\|f\|} = 1. \quad (4.17)$$

Question: What is the normalised form of $\{1, \cos(\frac{n\pi x}{L}), \sin(\frac{n\pi x}{L})\}$?

Answer: $\{1/\sqrt{2L}, (1/\sqrt{L})\cos(\frac{n\pi x}{L}), (1/\sqrt{L})\sin(\frac{n\pi x}{L})\}$.

A set of mutually orthogonal functions that are all normalised is called an *orthonormal* set.

4.5 When is it a Fourier series?

The series discussed before are only useful if we can associate a function with them. How can we do that?

Lets us assume that the periodic function $f(x)$ has a Fourier series representation (exchange the summation and integration, and use orthogonality),

$$f(x) = \frac{a_0}{2} + \sum_{n=1}^{\infty} \left[a_n \cos\left(\frac{n\pi x}{L}\right) + b_n \sin\left(\frac{n\pi x}{L}\right) \right]. \quad (4.18)$$

We can now use the orthogonality of the trigonometric functions to find that

$$\frac{1}{L} \int_{-L}^L f(x) \cdot 1 dx = a_0, \quad (4.19)$$

$$\frac{1}{L} \int_{-L}^L f(x) \cdot \cos\left(\frac{n\pi x}{L}\right) dx = a_n, \quad (4.20)$$

$$\frac{1}{L} \int_{-L}^L f(x) \cdot \sin\left(\frac{n\pi x}{L}\right) dx = b_n. \quad (4.21)$$

This defines the Fourier coefficients for a given $f(x)$. If these coefficients all exist we have defined a Fourier series, about whose convergence we shall talk in a later lecture.

An important property of Fourier series is given in Parseval's lemma:

$$\int_{-L}^L f(x)^2 dx = \frac{La_0^2}{2} + L \sum_{n=1}^{\infty} (a_n^2 + b_n^2). \quad (4.22)$$

This looks like a triviality, until one realises what we have done: we have once again interchanged an infinite summation and an integration. There are many cases where such an interchange fails, and actually it make a

strong statement about the orthogonal set when it holds. This property is usually referred to as completeness. We shall only discuss complete sets in these lectures.

Now let us study an example. We consider a square wave (this example will return a few times)

$$f(x) = \begin{cases} -3 & \text{if } -5 + 10n < x < 10n \\ 3 & \text{if } 10n < x < 5 + 10n \end{cases}, \quad (4.23)$$

where n is an integer, as sketched in Fig. 4.1.

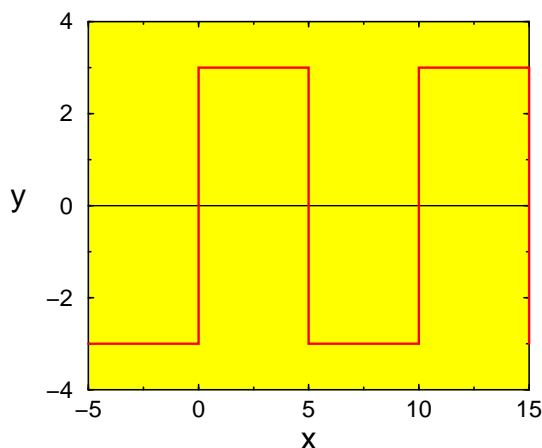


Figure 4.1: The square wave (4.23).

This function is not defined at $x = 5n$. We easily see that $L = 5$. The Fourier coefficients are

$$\begin{aligned} a_0 &= \frac{1}{5} \int_{-5}^0 -3 dx + \frac{1}{5} \int_0^5 3 dx = 0 \\ a_n &= \frac{1}{5} \int_{-5}^0 -3 \cos\left(\frac{n\pi x}{5}\right) + \frac{1}{5} \int_0^5 3 \cos\left(\frac{n\pi x}{5}\right) = 0 \\ b_n &= \frac{1}{5} \int_{-5}^0 -3 \sin\left(\frac{n\pi x}{5}\right) + \frac{1}{5} \int_0^5 3 \sin\left(\frac{n\pi x}{5}\right) \\ &= \frac{3}{n\pi} \cos\left(\frac{n\pi x}{5}\right) \Big|_{-5}^0 - \frac{3}{n\pi} \cos\left(\frac{n\pi x}{5}\right) \Big|_0^5 \\ &= \frac{6}{n\pi} [1 - \cos(n\pi)] = \begin{cases} \frac{12}{n\pi} & \text{if } n \text{ odd} \\ 0 & \text{if } n \text{ even} \end{cases} \end{aligned} \quad (4.24)$$

And thus ($n = 2m + 1$)

$$f(x) = \frac{12}{\pi} \sum_{m=0}^{\infty} \frac{1}{2m+1} \sin\left(\frac{(2m+1)\pi x}{5}\right). \quad (4.25)$$

Question: What happens if we apply Parseval's theorem to this series?

Answer: We find

$$\int_{-5}^5 9 dx = 5 \frac{144}{\pi^2} \sum_{m=0}^{\infty} \left(\frac{1}{2m+1}\right)^2 \quad (4.26)$$

Which can be used to show that

$$\sum_{m=0}^{\infty} \left(\frac{1}{2m+1} \right)^2 = \frac{\pi^2}{8}. \quad (4.27)$$

4.6 Fourier series for even and odd functions

Notice that in the Fourier series of the square wave (4.23) all coefficients a_n vanish, the series only contains sines. This is a very general phenomenon for so-called even and odd functions.

A function is called even if $f(-x) = f(x)$, e.g. $\cos(x)$.
 A function is called odd if $f(-x) = -f(x)$, e.g. $\sin(x)$.

These have somewhat different properties than the even and odd numbers:

1. The sum of two even functions is even, and of two odd ones odd.
2. The product of two even or two odd functions is even.
3. The product of an even and an odd function is odd.

Question: Which of the following functions is even or odd?

a) $\sin(2x)$, b) $\sin(x)\cos(x)$, c) $\tan(x)$, d) x^2 , e) x^3 , f) $|x|$

Answer: even: d, f; odd: a, b, c, e.

Now if we look at a Fourier series, the *Fourier cosine series*

$$f(x) = \frac{a_0}{2} + \sum_{n=1}^{\infty} a_n \cos \frac{n\pi}{L} x \quad (4.28)$$

describes an even function (why?), and the *Fourier sine series*

$$f(x) = \sum_{n=1}^{\infty} b_n \sin \frac{n\pi}{L} x \quad (4.29)$$

an odd function. These series are interesting by themselves, but play an especially important rôle for functions defined on half the Fourier interval, i.e., on $[0, L]$ instead of $[-L, L]$. There are three possible ways to define a Fourier series in this way, see Fig. 4.2

1. Continue f as an even function, so that $f'(0) = 0$.
2. Continue f as an odd function, so that $f(0) = 0$.
3. Neither of the two above. We know nothing about f at $x = 0$.

Of course these all lead to different Fourier series, that represent the same function on $[0, L]$. The usefulness of even and odd Fourier series is related to the imposition of boundary conditions. A Fourier cosine series has $df/dx = 0$ at $x = 0$, and the Fourier sine series has $f(x = 0) = 0$. Let me check the first of these statements:

$$\frac{d}{dx} \left[\frac{a_0}{2} + \sum_{n=1}^{\infty} a_n \cos \frac{n\pi}{L} x \right] = -\frac{\pi}{L} \sum_{n=1}^{\infty} n a_n \sin \frac{n\pi}{L} x = 0 \quad \text{at } x = 0. \quad (4.30)$$

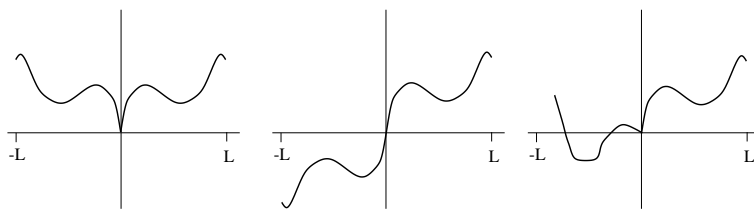


Figure 4.2: A sketch of the possible ways to continue f beyond its definition region for $0 < x < L$. From left to right as even function, odd function or assuming no symmetry at all.

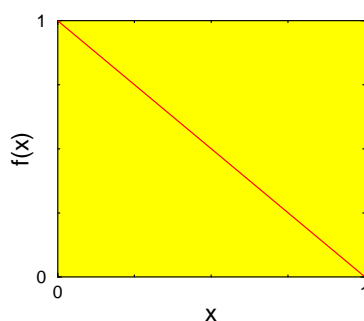


Figure 4.3: The function $y = 1 - x$.

As an example look at the function $f(x) = 1 - x$, $0 \leq x \leq 1$, with an even continuation on the interval $[-1, 1]$. We find

$$\begin{aligned}
 a_0 &= \frac{2}{1} \int_0^1 (1-x) dx = 1 \\
 a_n &= 2 \int_0^1 (1-x) \cos n\pi x dx \\
 &= \left\{ \frac{2}{n\pi} \sin n\pi x - \frac{2}{n^2\pi^2} [\cos n\pi x + n\pi x \sin n\pi x] \right\} \Big|_0^1 \\
 &= \begin{cases} 0 & \text{if } n \text{ even} \\ \frac{4}{n^2\pi^2} & \text{if } n \text{ is odd} \end{cases} .
 \end{aligned} \tag{4.31}$$

So, changing variables by defining $n = 2m + 1$ so that in a sum over all m n runs over all odd numbers,

$$f(x) = \frac{1}{2} + \frac{4}{\pi^2} \sum_{m=0}^{\infty} \frac{1}{(2m+1)^2} \cos(2m+1)\pi x. \tag{4.32}$$

4.7 Convergence of Fourier series

The final subject we shall consider is the convergence of Fourier series. I shall show two examples, closely linked, but with radically different behaviour.

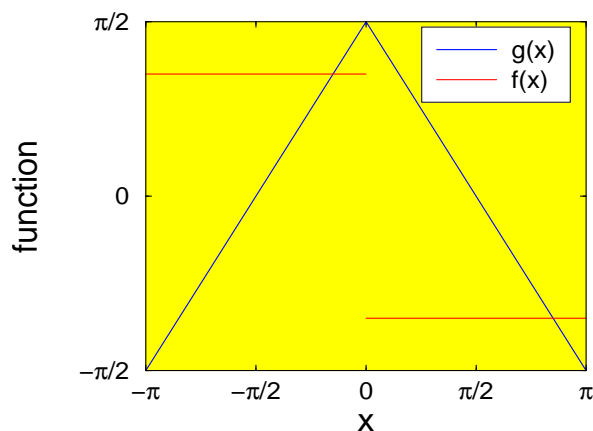
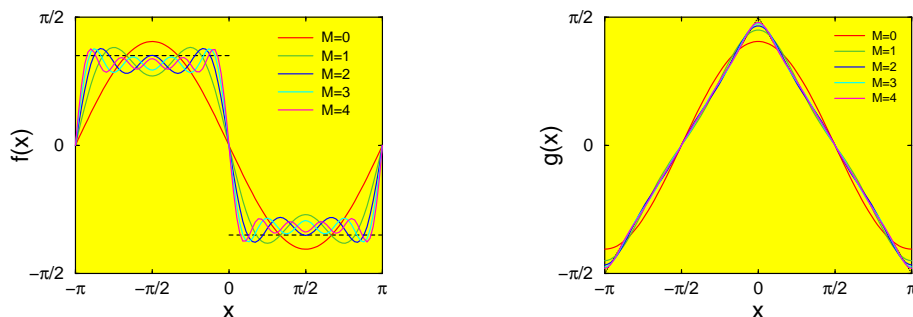


Figure 4.4: The square and triangular waves on their fundamental domain.

1. A square wave, $f(x) = 1$ for $-\pi < x < 0$; $f(x) = -1$ for $0 < x < \pi$.
2. a triangular wave, $g(x) = \pi/2 + x$ for $-\pi < x < 0$; $g(x) = \pi/2 - x$ for $0 < x < \pi$.

Note that f is the derivative of g .

Figure 4.5: The convergence of the Fourier series for the square (left) and triangular wave (right). the number M is the order of the highest Fourier component.

It is not very hard to find the relevant Fourier series,

$$f(x) = -\frac{4}{\pi} \sum_{m=0}^{\infty} \frac{1}{2m+1} \sin(2m+1)x, \quad (4.33)$$

$$g(x) = \frac{4}{\pi} \sum_{m=0}^{\infty} \frac{1}{(2m+1)^2} \cos(2m+1)x. \quad (4.34)$$

Let us compare the partial sums, where we let the sum in the Fourier series run from $m = 0$ to $m = M$ instead of $m = 0 \dots \infty$. We note a marked difference between the two cases. The convergence of the Fourier series of

g is uneventful, and after a few steps it is hard to see a difference between the partial sums, as well as between the partial sums and g . For f , the square wave, we see a surprising result: Even though the approximation gets better and better in the (flat) middle, there is a finite (and constant!) overshoot near the jump. The *area* of this overshoot becomes smaller and smaller as we increase M . This is called the Gibbs phenomenon (after its discoverer). It can be shown that for any function with a discontinuity such an effect is present, and that the size of the overshoot only depends on the size of the discontinuity! A final, slightly more interesting version of this picture, is shown in Fig. 4.6.

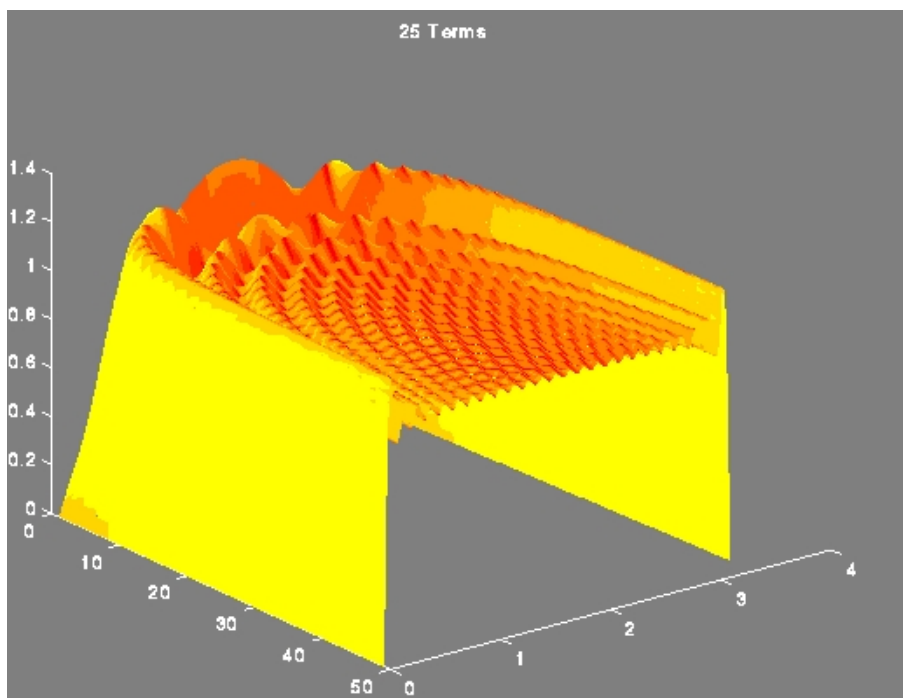


Figure 4.6: A three-dimensional representation of the Gibbs phenomenon for the square wave. The axis orthogonal to the paper labels the number of Fourier components.

Chapter 5

Separation of variables on rectangular domains

In this section we shall investigate two dimensional equations defined on rectangular domains. We shall either look at finite rectangles, when we have two space variables, or at semi-infinite rectangles when one of the variables is time. We shall study all three different types of equation.

5.1 Cookbook

Let me start with a recipe that describes the approach to separation of variables, as exemplified in the following sections, and in later chapters. Try to trace the steps for all the examples you encounter in this course.

- Take care that the boundaries are naturally described in your variables (i.e., at the boundary one of the coordinates is constant)!
- Write the unknown function as a product of functions in each variable.
- Divide by the function, so as to have a ratio of functions in one variable equal to a ratio of functions in the other variable.
- Since these two are equal they must both equal to a constant.
- Separate the boundary and initial conditions. Those that are zero can be re-expressed as conditions on one of the unknown functions.
- Solve the equation for that function where most boundary information is known.
- This usually determines a discrete set of separation parameters.
- Solve the remaining equation for each parameter.
- Use the superposition principle (true for homogeneous and linear equations) to add all these solutions with an unknown constants multiplying each of the solutions.
- Determine the constants from the remaining boundary and initial conditions.

5.2 parabolic equation

Let us first study the heat equation in 1 space (and, of course, 1 time) dimension. This is the standard example of a parabolic equation.

$$\frac{\partial u}{\partial t} = k \frac{\partial^2 u}{\partial x^2}, \quad 0 < x < L, \quad t > 0. \quad (5.1)$$

with boundary conditions

$$u(0, t) = 0, \quad u(L, t) = 0, \quad t > 0, \quad (5.2)$$

and initial condition

$$u(x, 0) = x, \quad 0 < x < L. \quad (5.3)$$

We shall attack this problem by separation of variables, a technique always worth trying when attempting to solve a PDE,

$$u(x, t) = X(x)T(t). \quad (5.4)$$

This leads to the differential equation

$$X(x)T'(t) = kX''(x)T(t). \quad (5.5)$$

We find, by dividing both sides by XT , that

$$\frac{1}{k} \frac{T'(t)}{T(t)} = \frac{X''(x)}{X(x)}. \quad (5.6)$$

Thus the left-hand side, a function of t , equals a function of x on the right-hand side. This is not possible unless both sides are independent of x and t , i.e. constant. Let us call this constant $-\lambda$.

We obtain two differential equations

$$T'(t) = -\lambda k T(t) \quad (5.7)$$

$$X''(x) = -\lambda X(x) \quad (5.8)$$

Question: What happens if $X(x)T(t)$ is zero at some point ($x = x_0, t = t_0$)?

Answer: Nothing. We can still perform the same trick.

This is not so trivial as I suggest. We either have $X(x_0) = 0$ or $T(t_0) = 0$. Let me just consider the first case, and assume $T(t_0) \neq 0$. In that case we find (from (5.5)), substituting $t = t_0$, that $X''(x_0) = 0$.

We now have to distinguish the three cases $\lambda > 0$, $\lambda = 0$, and $\lambda < 0$.

$\lambda > 0$

Write $\alpha^2 = \lambda$, so that the equation for X becomes

$$X''(x) = -\alpha^2 X(x). \quad (5.9)$$

This has as solution

$$X(x) = A \cos \alpha x + B \sin \alpha x. \quad (5.10)$$

$X(0) = 0$ gives $A \cdot 1 + B \cdot 0 = 0$, or $A = 0$. Using $X(L) = 0$ we find that

$$B \sin \alpha L = 0 \quad (5.11)$$

which has a nontrivial (i.e., one that is not zero) solution when $\alpha L = n\pi$, with n a positive integer. This leads to $\lambda_n = \frac{n^2 \pi^2}{L^2}$.

$$\boxed{\lambda = 0}$$

We find that $X = A + Bx$. The boundary conditions give $A = B = 0$, so there is only the trivial (zero) solution.

$$\boxed{\lambda < 0}$$

We write $\lambda = -\alpha^2$, so that the equation for X becomes

$$X''(x) = -\alpha^2 X(x). \quad (5.12)$$

The solution is now in terms of exponential, or hyperbolic functions,

$$X(x) = A \cosh x + B \sinh x. \quad (5.13)$$

The boundary condition at $x = 0$ gives $A = 0$, and the one at $x = L$ gives $B = 0$. Again there is only a trivial solution.

We have thus only found a solution for a discrete set of “eigenvalues” $\lambda_n > 0$. Solving the equation for T we find an exponential solution, $T = \exp(-\lambda k T)$. Combining all this information together, we have

$$u_n(x, t) = \exp\left(-k \frac{n^2 \pi^2}{L^2} t\right) \sin\left(\frac{n\pi}{L} x\right). \quad (5.14)$$

The equation we started from was linear and homogeneous, so we can superimpose the solutions for different values of n ,

$$u(x, t) = \sum_{n=1}^{\infty} c_n \exp\left(-k \frac{n^2 \pi^2}{L^2} t\right) \sin\left(\frac{n\pi}{L} x\right). \quad (5.15)$$

This is a Fourier sine series with time-dependent Fourier coefficients. The initial condition specifies the coefficients c_n , which are the Fourier coefficients at time $t = 0$. Thus

$$\begin{aligned} c_n &= \frac{2}{L} \int_0^L x \sin \frac{n\pi x}{L} dx \\ &= -\frac{2L}{n\pi} (-1)^n = (-1)^{n+1} \frac{2L}{n\pi}. \end{aligned} \quad (5.16)$$

The final solution to the PDE + BC's + IC is

$$u(x, t) = \sum_{n=1}^{\infty} (-1)^{n+1} \frac{2L}{n\pi} \exp\left(-k \frac{n^2 \pi^2}{L^2} t\right) \sin \frac{n\pi}{L} x. \quad (5.17)$$

This solution is transient: if time goes to infinity, it goes to zero.

5.3 hyperbolic equation

As an example of a hyperbolic equation we study the wave equation. One of the systems it can describe is a transmission line for high frequency signals, 40m long.

$$\begin{aligned} \frac{\partial^2 V}{\partial x^2} &= \underbrace{LC}_{\text{imp} \times \text{capac}} \frac{\partial^2 V}{\partial t^2} \\ \frac{\partial V}{\partial x}(0, t) &= \frac{\partial V}{\partial x}(40, t) = 0, \\ V(x, 0) &= f(x), \\ \frac{\partial V}{\partial t}(x, 0) &= 0, \end{aligned} \quad (5.18)$$

Separate variables,

$$V(x, t) = X(x)T(t). \quad (5.19)$$

We find

$$\frac{X''}{X} = LC \frac{T''}{T} = -\lambda. \quad (5.20)$$

Which in turn shows that

$$\begin{aligned} X'' &= -\lambda X, \\ T'' &= -\frac{\lambda}{LC} T. \end{aligned} \quad (5.21)$$

We can also separate most of the initial and boundary conditions; we find

$$X'(0) = X'(40) = 0, \quad T'(0) = 0. \quad (5.22)$$

Once again distinguish the three cases $\lambda > 0$, $\lambda = 0$, and $\lambda < 0$:

$\lambda > 0$ (almost identical to previous problem) $\lambda_n = \alpha_n^2$, $\alpha_n = \frac{n\pi}{40}$, $X_n = \cos(\alpha_n x)$. We find that

$$T_n(t) = D_n \cos\left(\frac{n\pi t}{40\sqrt{LC}}\right) + E_n \sin\left(\frac{n\pi t}{40\sqrt{LC}}\right). \quad (5.23)$$

$T'(0) = 0$ implies $E_n = 0$, and taking both together we find (for $n \geq 1$)

$$V_n(x, t) = \cos\left(\frac{n\pi t}{40\sqrt{LC}}\right) \cos\left(\frac{n\pi x}{40}\right). \quad (5.24)$$

$\lambda = 0$ $X(x) = A + Bx$. $B = 0$ due to the boundary conditions. We find that $T(t) = Dt + E$, and D is 0 due to initial condition. We conclude that

$$V_0(x, t) = 1. \quad (5.25)$$

$\lambda < 0$ No solution.

Taking everything together we find that

$$V(x, t) = \frac{a_0}{2} + \sum_{n=1}^{\infty} a_n \cos\left(\frac{n\pi t}{40\sqrt{LC}}\right) \cos\left(\frac{n\pi x}{40}\right). \quad (5.26)$$

The one remaining initial condition gives

$$V(x, 0) = f(x) = \frac{a_0}{2} + \sum_{n=1}^{\infty} a_n \cos\left(\frac{n\pi x}{40}\right). \quad (5.27)$$

Use the Fourier cosine series (even continuation of f) to find

$$\begin{aligned} a_0 &= \frac{1}{20} \int_0^{40} f(x) dx, \\ a_n &= \frac{1}{20} \int_0^{40} f(x) \cos\left(\frac{n\pi x}{40}\right) dx. \end{aligned} \quad (5.28)$$

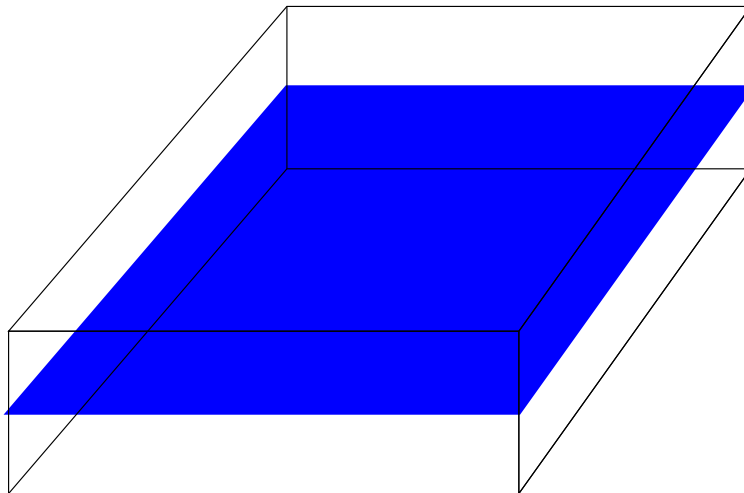


Figure 5.1: A conducting sheet insulated from above and below.

5.4 Laplace's equation

In a square, heat-conducting sheet, insulated from above and below

$$\frac{1}{k} \frac{\partial u}{\partial t} = \frac{\partial^2 u}{\partial x^2} + \frac{\partial^2 u}{\partial y^2}. \quad (5.29)$$

If we are looking for a steady state solution, i.e. we take $u(x, y, t) = u(x, y)$ the time derivative does not contribute, and we get Laplace's equation

$$\frac{\partial^2 u}{\partial x^2} + \frac{\partial^2 u}{\partial y^2} = 0, \quad (5.30)$$

an example of an *elliptic* equation. Let us once again look at a square plate of size $a \times b$, and impose the boundary conditions

$$\begin{aligned} u(x, 0) &= 0, \\ u(a, y) &= 0, \\ u(x, b) &= x, \\ u(0, y) &= 0. \end{aligned} \quad (5.31)$$

(This choice is made so as to be able to evaluate Fourier series easily. It is not very realistic!) We once again separate variables,

$$u(x, y) = X(x)Y(y), \quad (5.32)$$

and define

$$\frac{X''}{X} = -\frac{Y''}{Y} = -\lambda. \quad (5.33)$$

Or explicitly

$$X'' = -\lambda X, \quad Y'' = \lambda Y. \quad (5.34)$$

With boundary conditions $X(0) = X(a) = 0$, $Y(0) = 0$. The 3rd boundary conditions remains to be implemented.

Once again distinguish three cases:

$\lambda > 0$ $X(x) = \sin \alpha_n(x)$, $\alpha_n = \frac{n\pi}{a}$, $\lambda_n = \alpha_n^2$. We find

$$\begin{aligned} Y(y) &= C_n \sinh \alpha_n y + D_n \cosh \alpha_n y \\ &= C'_n \exp(\alpha_n y) + D'_n \exp(-\alpha_n y). \end{aligned} \tag{5.35}$$

Since $Y(0) = 0$ we find $D_n = 0$ ($\sinh(0) = 0$, $\cosh(0) = 1$).

$\lambda \leq 0$ No solutions
So we have

$$u(x, y) = \sum_{n=1}^{\infty} b_n \sin \alpha_n x \sinh \alpha_n y \tag{5.36}$$

The one remaining boundary condition gives

$$u(x, b) = x = \sum_{n=1}^{\infty} b_n \sin \alpha_n x \sinh \alpha_n b. \tag{5.37}$$

This leads to the Fourier series of x ,

$$\begin{aligned} b_n \sinh \alpha_n b &= \frac{2}{a} \int_0^a x \sin \frac{n\pi x}{a} dx \\ &= \frac{2a}{n\pi} (-1)^{n+1}. \end{aligned} \tag{5.38}$$

So, in short, we have

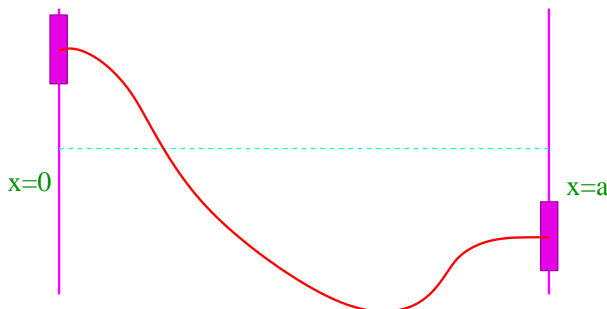
$$V(x, y) = \frac{2a}{\pi} \sum_{n=1}^{\infty} (-1)^{n+1} \frac{\sin \frac{n\pi x}{a} \sinh \frac{n\pi y}{a}}{n \sinh \frac{n\pi b}{a}}. \tag{5.39}$$

Question: The dependence on x enters through a trigonometric function, and that on y through a hyperbolic function. Yet the differential equation is symmetric under interchange of x and y . What happens?

Answer: The symmetry is broken by the boundary conditions.

5.5 More complex initial/boundary conditions

It is not always possible on separation of variables to separate initial or boundary conditions in a condition on one of the two functions. We can either map the problem into simpler ones by using superposition of boundary conditions, a way discussed below, or we can carry around additional integration constants.



Let me give an example of these procedures. Consider a vibrating string attached to two air bearings, gliding along rods 4m apart. You are asked to find the displacement for all times, if the initial displacement, i.e. at $t = 0$ s is one meter and the initial velocity is x/t_0 m/s.

The differential equation and its boundary conditions are easily written down,

$$\begin{aligned}\frac{\partial^2 u}{\partial x^2} &= \frac{1}{c^2} \frac{\partial^2 u}{\partial t^2}, \\ \frac{\partial u}{\partial x}(0, t) &= \frac{\partial u}{\partial x}(4, t) = 0, \quad t > 0, \\ u(x, 0) &= 1, \\ \frac{\partial u}{\partial t}(x, 0) &= x/t_0.\end{aligned}\tag{5.40}$$

Question: What happens if I add two solutions v and w of the differential equation that satisfy the same BC's as above but different IC's,

$$\begin{aligned}v(x, 0) = 0 \quad , \quad \frac{\partial v}{\partial t}(x, 0) = x/t_0, \\ w(x, 0) = 1 \quad , \quad \frac{\partial w}{\partial t}(x, 0) = 0?\end{aligned}\tag{5.41}$$

Answer: $u=v+w$, we can add the BC's.

If we separate variables, $u(x, t) = X(x)T(t)$, we find that we obtain easy boundary conditions for $X(x)$,

$$X'(0) = X'(4) = 0,\tag{5.42}$$

but we have no such luck for (t) . As before we solve the eigenvalue equation for X , and find solutions for $\lambda_n = \frac{n^2\pi^2}{16}$, $n = 0, 1, \dots$, and $X_n = \cos(\frac{n\pi}{4}x)$. Since we have no boundary conditions for $T(t)$, we have to take the full solution,

$$\begin{aligned}T_0(t) &= A_0 + B_0t, \\ T_n(t) &= A_n \cos \frac{n\pi}{4}ct + B_n \sin \frac{n\pi}{4}ct,\end{aligned}\tag{5.43}$$

and thus

$$u(x, t) = \frac{1}{2}(A_0 + B_0t) + \sum_{n=1}^{\infty} \left(A_n \cos \frac{n\pi}{4}ct + B_n \sin \frac{n\pi}{4}ct \right) \cos \frac{n\pi}{4}x.\tag{5.44}$$

Now impose the initial conditions

a)

$$u(x, 0) = 1 = \frac{1}{2}A_0 + \sum_{n=1}^{\infty} A_n \cos \frac{n\pi}{4}x,\tag{5.45}$$

which implies $A_0 = 2$, $A_n = 0, n > 0$.

b)

$$\frac{\partial u}{\partial t}(x, 0) = x/t_0 = \frac{1}{2}B_0 + \sum_{n=1}^{\infty} \frac{n\pi c}{4} B_n \cos \frac{n\pi}{4}x.\tag{5.46}$$

This is the Fourier sine-series of x , which we have encountered before, and leads to the coefficients $B_0 = 4$ and $B_n = -\frac{64}{n^3\pi^3c}$ if n is odd and zero otherwise.

So finally

$$u(x, t) = (1 + 2t) - \frac{64}{\pi^3} \sum_{n \text{ odd}} \frac{1}{n^3} \sin \frac{n\pi ct}{4} \cos \frac{n\pi x}{4}.\tag{5.47}$$

5.6 Inhomogeneous equations

Consider a rod of length 2m, laterally insulated (heat only flows inside the rod). Initially the temperature u is

$$\frac{1}{k} \sin\left(\frac{\pi x}{2}\right) + 500 \text{ K.} \quad (5.48)$$

The left and right ends are both attached to a thermostat, and the temperature at the left side is fixed at a temperature of 500 K and the right end at 100 K. There is also a heater attached to the rod that adds a constant heat of $\sin\left(\frac{\pi x}{2}\right)$ to the rod. The differential equation describing this is inhomogeneous

$$\begin{aligned} \frac{\partial u}{\partial t} &= k \frac{\partial^2 u}{\partial x^2} + \sin\left(\frac{\pi x}{2}\right), \\ u(0, t) &= 500, \\ u(2, t) &= 100, \\ u(x, 0) &= \frac{1}{k} \sin\left(\frac{\pi x}{2}\right) + 500. \end{aligned} \quad (5.49)$$

Since the inhomogeneity is time-independent we write

$$u(x, t) = v(x, t) + h(x), \quad (5.50)$$

where h will be determined so as to make v satisfy a homogeneous equation. Substituting this form, we find

$$\frac{\partial v}{\partial t} = k \frac{\partial^2 v}{\partial x^2} + kh'' + \sin\left(\frac{\pi x}{2}\right). \quad (5.51)$$

To make the equation for v homogeneous we require

$$h''(x) = -\frac{1}{k} \sin\left(\frac{\pi x}{2}\right), \quad (5.52)$$

which has the solution

$$h(x) = C_1 x + C_2 + \frac{4}{k\pi^2} \sin\left(\frac{\pi x}{2}\right). \quad (5.53)$$

At the same time we let h carry the boundary conditions, $h(0) = 500$, $h(2) = 100$, and thus

$$h(x) = -200x + 500 + \frac{4}{k\pi^2} \sin\left(\frac{\pi x}{2}\right). \quad (5.54)$$

The function v satisfies

$$\begin{aligned} \frac{\partial v}{\partial t} &= k \frac{\partial^2 v}{\partial x^2}, \\ v(0, t) &= v(\pi, t) = 0, \\ v(x, 0) &= u(x, 0) - h(x) = 200x. \end{aligned} \quad (5.55)$$

This is a problem of a type that we have seen before. By separation of variables we find

$$v(x, t) = \sum_{n=1}^{\infty} b_n \exp\left(-\frac{n^2 \pi^2}{4} kt\right) \sin \frac{n\pi}{2} x. \quad (5.56)$$

The initial condition gives

$$\sum_{n=1}^{\infty} b_n \sin nx = 200x. \quad (5.57)$$

from which we find

$$b_n = (-1)^{n+1} \frac{800}{n\pi}. \quad (5.58)$$

And thus

$$u(x, t) = -\frac{200}{x} + 500 + \frac{4}{\pi^2 k} \sin\left(\frac{\pi x}{2}\right) + \frac{800}{\pi} \sum_{n=1}^{\infty} \frac{(-1)^n}{n+1} \sin\left(\frac{\pi n x}{2}\right) e^{-k(n\pi/2)^2 t}. \quad (5.59)$$

Note: as $t \rightarrow \infty$, $u(x, t) \rightarrow -\frac{400}{\pi}x + 500 + \frac{\sin \frac{\pi}{2} x}{k}$. As can be seen in Fig. 5.2 this approach is quite rapid – we have chosen $k = 1/500$ in that figure, and summed over the first 60 solutions.

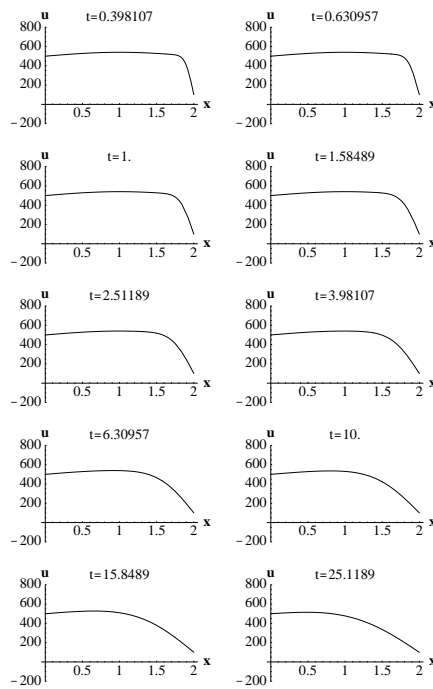


Figure 5.2: Time dependence of the solution to the inhomogeneous equation (5.59)

Chapter 6

D'Alembert's solution to the wave equation

I have argued before that it is usually not useful to study the general solution of a partial differential equation. As any such sweeping statement it needs to be qualified, since there are some exceptions. One of these is the one-dimensional wave equation

$$\frac{\partial^2 u}{\partial x^2}(x, t) - \frac{1}{c^2} \frac{\partial^2 u}{\partial t^2}(x, t) = 0, \quad (6.1)$$

which has a general solution, due to the French mathematician d'Alembert.

The reason for this solution becomes obvious when we consider the physics of the problem: The wave equation describes waves that propagate with the speed c (the speed of sound, or light, or whatever). Thus any perturbation to the one dimensional medium will propagate either right- or leftwards with such a speed. This means that we would expect the solutions to propagate along the characteristics $x \pm ct = \text{constant}$, as seen in Fig. 6.1.

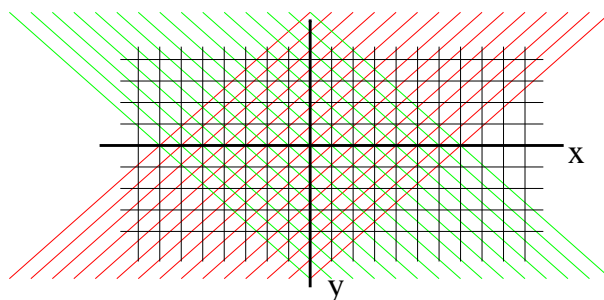


Figure 6.1: The change of variables from x and t to $w = x + ct$ and $z = x - ct$.

In order to understand the solution in all mathematical details we make a change of variables

$$w = x + ct, \quad z = x - ct. \quad (6.2)$$

We write $u(x, t) = \bar{u}(w, z)$. We find

$$\begin{aligned}\frac{\partial u}{\partial x} &= \frac{\partial \bar{u}}{\partial w} \frac{\partial w}{\partial x} + \frac{\partial \bar{u}}{\partial z} \frac{\partial z}{\partial x} = \frac{\partial \bar{u}}{\partial w} + \frac{\partial \bar{u}}{\partial z}, \\ \frac{\partial^2 u}{\partial x^2} &= \frac{\partial^2 \bar{u}}{\partial w^2} + 2 \frac{\partial^2 \bar{u}}{\partial w \partial z} + \frac{\partial^2 \bar{u}}{\partial z^2}, \\ \frac{\partial u}{\partial t} &= \frac{\partial \bar{u}}{\partial w} \frac{\partial w}{\partial t} + \frac{\partial \bar{u}}{\partial z} \frac{\partial z}{\partial t} = c \left(\frac{\partial \bar{u}}{\partial w} - \frac{\partial \bar{u}}{\partial z} \right), \\ \frac{\partial^2 u}{\partial t^2} &= c^2 \left(\frac{\partial^2 \bar{u}}{\partial w^2} - 2 \frac{\partial^2 \bar{u}}{\partial w \partial z} + \frac{\partial^2 \bar{u}}{\partial z^2} \right)\end{aligned}\tag{6.3}$$

We thus conclude that

$$\frac{\partial^2 u}{\partial x^2}(x, t) - \frac{1}{c^2} \frac{\partial^2 u}{\partial t^2}(x, t) = 4 \frac{\partial^2 \bar{u}}{\partial w \partial z} = 0\tag{6.4}$$

An equation of the type $\frac{\partial^2 \bar{u}}{\partial w \partial z} = 0$ can easily be solved by subsequent integration with respect to z and w . First solve for the z dependence,

$$\frac{\partial \bar{u}}{\partial w} = \Phi(w),\tag{6.5}$$

where Φ is any function of w only. Now solve this equation for the w dependence,

$$\bar{u}(w, z) = \int \Phi(w) dw = F(w) + G(z)\tag{6.6}$$

In other words,

$$\boxed{u(x, t) = F(x + ct) + G(x - ct)},\tag{6.7}$$

with F and G arbitrary functions.

This equation is quite useful in practical applications. Let us first look at how to use this when we have an infinite system (no limits on x). Assume that we are treating a problem with initial conditions

$$u(x, 0) = f(x), \quad \frac{\partial u}{\partial t}(x, 0) = g(x).\tag{6.8}$$

Let me assume $f(\pm\infty) = 0$. I shall assume this also holds for F and G (we don't have to, but this removes some arbitrary constants that don't play a rôle in u). We find

$$\begin{aligned}F(x) + G(x) &= f(x), \\ c(F'(x) - G'(x)) &= g(x).\end{aligned}\tag{6.9}$$

The last equation can be massaged a bit to give

$$F(x) - G(x) = \underbrace{\frac{1}{c} \int_0^x g(y) dy}_{{}=\Gamma(x)} + C\tag{6.10}$$

Note that Γ is the integral over g . So *Gamma* will *always* be a continuous function, even if g is not!

And in the end we have

$$\begin{aligned}F(x) &= \frac{1}{2} [f(x) + \Gamma(x) + C] \\ G(x) &= \frac{1}{2} [f(x) - \Gamma(x) - C]\end{aligned}\tag{6.11}$$

Suppose we choose (for simplicity we take $c = 1\text{m/s}$)

$$f(x) = \begin{cases} x + 1 & \text{if } -1 < x < 0 \\ 1 - x & \text{if } 0 < x < 1 \\ 0 & \text{elsewhere} \end{cases}.\tag{6.12}$$

and $g(x) = 0$. The solution is then simply given by

$$u(x, t) = \frac{1}{2} [f(x + t) + f(x - t)]. \quad (6.13)$$

This can easily be solved graphically, as shown in Fig. 6.2.

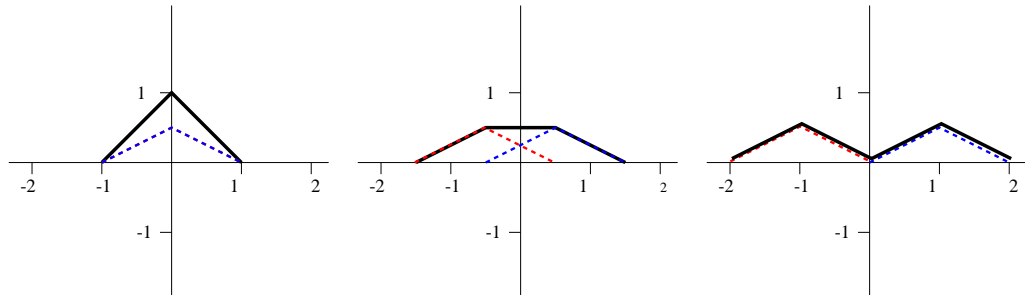


Figure 6.2: The graphical form of (6.13), for (from left to right) $t = 0s, t = 0.5s$ and $t = 1s$. The dashed lines are $\frac{1}{2}f(x + t)$ (leftward moving wave) and $\frac{1}{2}f(x - t)$ (rightward moving wave). The solid line is the sum of these two, and thus the solution u .

The case of a finite string is more complex. There we encounter the problem that even though f and g are only known for $0 < x < a$, $x \pm ct$ can take any value from $-\infty$ to ∞ . So we have to figure out a way to continue the function beyond the length of the string. The way to do that depends on the kind of boundary conditions: Here we shall *only* consider a string fixed at its ends.

$$\begin{aligned} u(0, t) = u(a, t) &= 0, \\ u(x, 0) = f(x) \quad \frac{\partial u}{\partial t}(x, 0) &= g(x). \end{aligned} \quad (6.14)$$

Initially we can follow the approach for the infinite string as sketched above, and we find that

$$\begin{aligned} F(x) &= \frac{1}{2} [f(x) + \Gamma(x) + C], \\ G(x) &= \frac{1}{2} [f(x) - \Gamma(x) - C]. \end{aligned} \quad (6.15)$$

Look at the boundary condition $u(0, t) = 0$. It shows that

$$\frac{1}{2} [f(ct) + f(-ct)] + \frac{1}{2} [\Gamma(ct) - \Gamma(-ct)] = 0. \quad (6.16)$$

Now we understand that f and Γ are completely arbitrary functions – we can pick any form for the initial conditions we want. Thus the relation found above can *only* hold when **both** terms are zero

$$\begin{aligned} f(x) &= -f(-x), \\ \Gamma(x) &= \Gamma(x). \end{aligned} \quad (6.17)$$

Now apply the other boundary condition, and find

$$\begin{aligned} f(a + x) &= -f(a - x), \\ \Gamma(a + x) &= \Gamma(a - x). \end{aligned} \quad (6.18)$$

The reflection conditions for f and Γ are similar to those for sines and cosines, and as we can see from Fig. 6.3 both f and Γ have period $2a$.

Now let me look at two examples

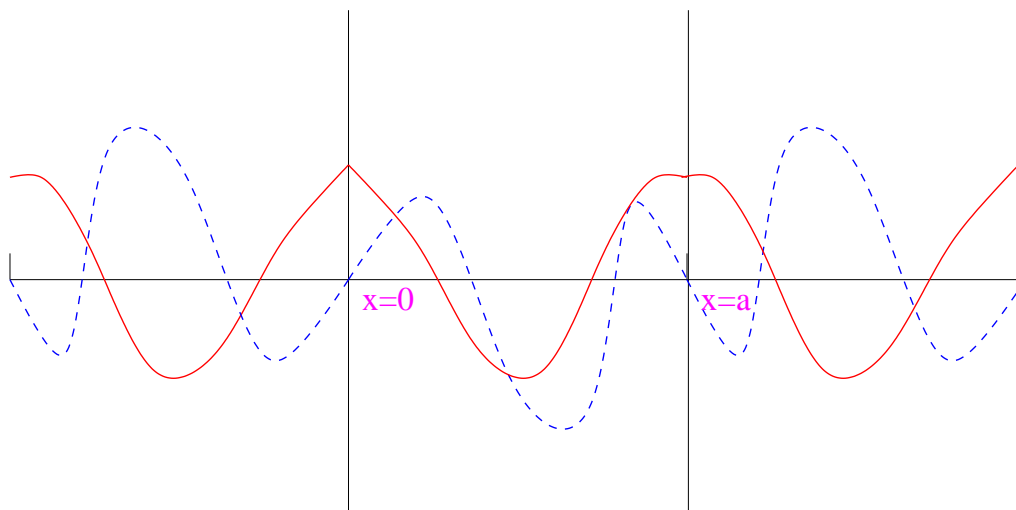


Figure 6.3: A schematic representation of the reflection conditions (6.17,6.18). The dashed line represents f and the dotted line Γ .

Example 6.1:

Find graphically a solution to

$$\begin{aligned} \frac{\partial^2 u}{\partial t^2} &= \frac{\partial^2 u}{\partial x^2} \quad (c = 1\text{m/s}) \\ u(x, 0) &= \begin{cases} 2x & \text{if } 0 \leq x \leq 2 \\ 24/5 - 2x/5 & \text{if } 2 \leq x \leq 12 \end{cases} \\ \frac{\partial u}{\partial t}(x, 0) &= 0 \\ u(0, t) &= u(12, t) = 0 \end{aligned} \quad (6.19)$$

Solution:

We need to continue f as an odd function, and we can take $\Gamma = 0$. We then have to add the left-moving wave $\frac{1}{2}f(x+t)$ and the right-moving wave $\frac{1}{2}f(x-t)$, as we have done in Figs. ???

Example 6.2:

Find graphically a solution to

$$\begin{aligned} \frac{\partial^2 u}{\partial t^2} &= \frac{\partial^2 u}{\partial x^2} \quad (c = 1\text{m/s}) \\ u(x, 0) &= 0 \\ \frac{\partial u}{\partial t}(x, 0) &= \begin{cases} 1 & \text{if } 4 \leq x \leq 6 \\ 0 & \text{elsewhere} \end{cases} \\ u(0, t) &= u(12, t) = 0. \end{aligned} \quad (6.20)$$

Solution:

In this case $f = 0$. We find

$$\begin{aligned}\Gamma(x) &= \int_0^x g(x') dx' \\ &= \begin{cases} 0 & \text{if } 0 < x < 4 \\ -4 + x & \text{if } 4 < x < 6 \\ 2 & \text{if } 6 < x < 12 \end{cases} . \end{aligned} \tag{6.21}$$

This needs to be continued as an even function.

Chapter 7

Polar and spherical coordinate systems

7.1 Polar coordinates

Polar coordinates in two dimensions are defined by

$$x = \rho \cos \phi, y = \rho \sin \phi, \quad (7.1)$$

$$\rho = \sqrt{x^2 + y^2}, \phi = \arctan(y/x), \quad (7.2)$$

as indicated schematically in Fig. 7.1.

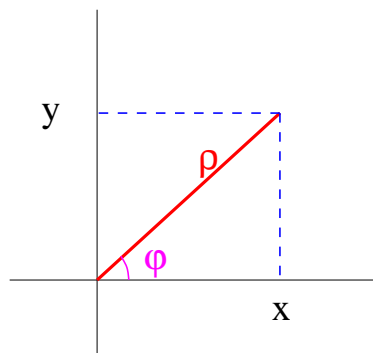


Figure 7.1: Polar coordinates

Using the chain rule we find

$$\begin{aligned}\frac{\partial}{\partial x} &= \frac{\partial \rho}{\partial x} \frac{\partial}{\partial \rho} + \frac{\partial \phi}{\partial x} \frac{\partial}{\partial \phi} \\ &= \frac{x}{\rho} \frac{\partial}{\partial \rho} - \frac{y}{\rho^2} \frac{\partial}{\partial \phi} \\ &= \cos \phi \frac{\partial}{\partial \rho} - \frac{\sin \phi}{\rho} \frac{\partial}{\partial \phi},\end{aligned}\tag{7.3}$$

$$\begin{aligned}\frac{\partial}{\partial y} &= \frac{\partial \rho}{\partial y} \frac{\partial}{\partial \rho} + \frac{\partial \phi}{\partial y} \frac{\partial}{\partial \phi} \\ &= \frac{y}{\rho} \frac{\partial}{\partial \rho} + \frac{x}{\rho^2} \frac{\partial}{\partial \phi} \\ &= \sin \phi \frac{\partial}{\partial \rho} + \frac{\cos \phi}{\rho} \frac{\partial}{\partial \phi},\end{aligned}\tag{7.4}$$

We can write

$$\nabla = \hat{\mathbf{e}}_\rho \frac{\partial}{\partial \rho} + \hat{\mathbf{e}}_\phi \frac{1}{\rho} \frac{\partial}{\partial \phi}\tag{7.5}$$

where the unit vectors

$$\begin{aligned}\hat{\mathbf{e}}_\rho &= (\cos \phi, \sin \phi), \\ \hat{\mathbf{e}}_\phi &= (-\sin \phi, \cos \phi),\end{aligned}\tag{7.6}$$

are an orthonormal set. We say that circular coordinates are *orthogonal*.

We can now use this to evaluate ∇^2 ,

$$\begin{aligned}\nabla^2 &= \cos^2 \phi \frac{\partial^2}{\partial \rho^2} + \frac{\sin \phi \cos \phi}{\rho^2} \frac{\partial}{\partial \phi} + \frac{\sin^2 \phi}{\rho} \frac{\partial}{\partial \rho} + \frac{\sin^2 \phi}{\rho^2} \frac{\partial^2}{\partial \phi^2} + \frac{\sin \phi \cos \phi}{\rho^2} \frac{\partial}{\partial \phi} \\ &\quad + \sin^2 \phi \frac{\partial^2}{\partial \rho^2} - \frac{\sin \phi \cos \phi}{\rho^2} \frac{\partial}{\partial \phi} + \frac{\cos^2 \phi}{\rho} \frac{\partial}{\partial \rho} + \frac{\cos^2 \phi}{\rho^2} \frac{\partial^2}{\partial \phi^2} - \frac{\sin \phi \cos \phi}{\rho^2} \frac{\partial}{\partial \phi} \\ &= \frac{\partial^2}{\partial \rho^2} + \frac{1}{\rho} \frac{\partial}{\partial \rho} + \frac{1}{\rho^2} \frac{\partial^2}{\partial \phi^2} \\ &= \frac{1}{\rho} \frac{\partial}{\partial \rho} \left(\rho \frac{\partial}{\partial \rho} \right) + \frac{1}{\rho^2} \frac{\partial^2}{\partial \phi^2}.\end{aligned}\tag{7.7}$$

(7.8)

A final useful relation is the integration over these coordinates.

As indicated schematically in Fig. 7.2, the surface related to a change $\rho \rightarrow \rho + \delta\rho$, $\phi \rightarrow \phi + \delta\phi$ is $\rho\delta\rho\delta\phi$. This leads us to the conclusion that an integral over x, y can be rewritten as

$$\int_V f(x, y) dx dy = \int_V f(\rho \cos \phi, \rho \sin \phi) \rho d\rho d\phi\tag{7.9}$$

7.2 spherical coordinates

Spherical coordinates are defined as

$$x = r \cos \phi \sin \theta, \quad y = r \sin \phi \sin \theta, \quad z = r \cos \theta,\tag{7.10}$$

$$r = \sqrt{x^2 + y^2 + z^2}, \quad \phi = \arctan(y/x), \quad \theta = \arctan\left(\frac{\sqrt{x^2 + y^2}}{z}\right),\tag{7.11}$$

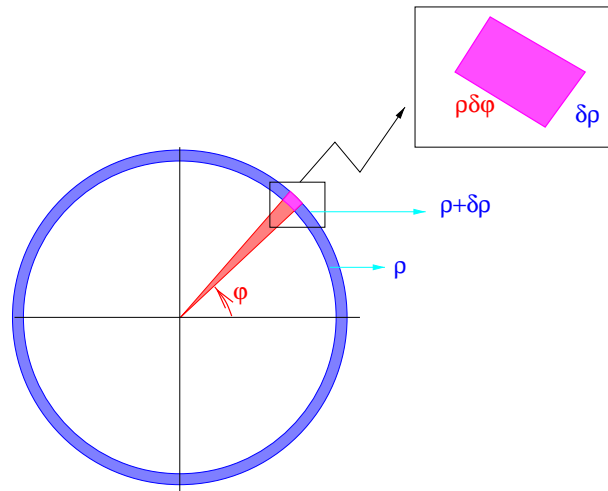


Figure 7.2: Integration in polar coordinates

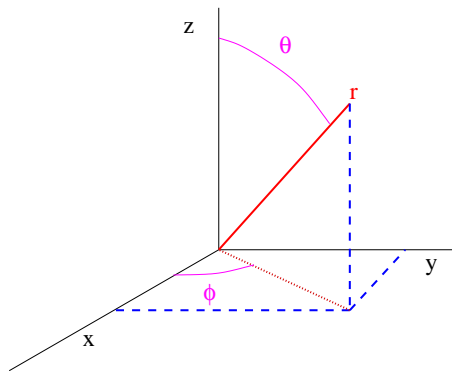


Figure 7.3: Spherical coordinates

as indicated schematically in Fig. 7.3.

Using the chain rule we find

$$\begin{aligned}\frac{\partial}{\partial x} &= \frac{\partial r}{\partial x} \frac{\partial}{\partial r} + \frac{\partial \phi}{\partial x} \frac{\partial}{\partial \phi} + \frac{\partial \theta}{\partial x} \frac{\partial}{\partial \theta} \\ &= \frac{x}{r} \frac{\partial}{\partial r} - \frac{y}{x^2 + y^2} \frac{\partial}{\partial \phi} + \frac{xz}{r^2 \sqrt{x^2 + y^2}} \frac{\partial}{\partial \theta} \\ &= \sin \theta \cos \phi \frac{\partial}{\partial r} - \frac{\sin \phi}{r \sin \theta} \frac{\partial}{\partial \phi} + \frac{\cos \phi \cos \theta}{r} \frac{\partial}{\partial \theta},\end{aligned}\tag{7.12}$$

$$\begin{aligned}\frac{\partial}{\partial y} &= \frac{\partial r}{\partial y} \frac{\partial}{\partial r} + \frac{\partial \phi}{\partial y} \frac{\partial}{\partial \phi} + \frac{\partial \theta}{\partial y} \frac{\partial}{\partial \theta} \\ &= \frac{y}{r} \frac{\partial}{\partial r} + \frac{x}{x^2 + y^2} \frac{\partial}{\partial \phi} + \frac{yz}{r^2 \sqrt{x^2 + y^2}} \frac{\partial}{\partial \theta} \\ &= \sin \theta \sin \phi \frac{\partial}{\partial r} + \frac{\cos \phi}{r \sin \theta} \frac{\partial}{\partial \phi} + \frac{\sin \phi \cos \theta}{r} \frac{\partial}{\partial \theta},\end{aligned}\tag{7.13}$$

$$\begin{aligned}\frac{\partial}{\partial z} &= \frac{\partial r}{\partial z} \frac{\partial}{\partial r} + \frac{\partial \phi}{\partial z} \frac{\partial}{\partial \phi} + \frac{\partial \theta}{\partial z} \frac{\partial}{\partial \theta} \\ &= \frac{z}{r} \frac{\partial}{\partial r} - \frac{\sqrt{x^2 + y^2}}{r^2} \frac{\partial}{\partial \theta} \\ &= \sin \theta \sin \phi \frac{\partial}{\partial r} - \frac{\sin \theta}{r} \frac{\partial}{\partial \theta}.\end{aligned}\tag{7.14}$$

$$\tag{7.15}$$

once again we can write ∇ in terms of these coordinates.

$$\nabla = \hat{\mathbf{e}}_r \frac{\partial}{\partial r} + \hat{\mathbf{e}}_\phi \frac{1}{r \sin \theta} \frac{\partial}{\partial \phi} + \hat{\mathbf{e}}_\theta \frac{1}{r} \frac{\partial}{\partial \theta}\tag{7.16}$$

where the unit vectors

$$\begin{aligned}\hat{\mathbf{e}}_r &= (\sin \theta \cos \phi, \sin \theta \sin \phi, \cos \theta), \\ \hat{\mathbf{e}}_\phi &= (-\sin \phi, \cos \phi, 0), \\ \hat{\mathbf{e}}_\theta &= (\cos \phi \cos \theta, \sin \phi \cos \theta, -\sin \theta).\end{aligned}\tag{7.17}$$

are an orthonormal set. We say that spherical coordinates are *orthogonal*.

We can use this to evaluate $\Delta = \nabla^2$,

$$\Delta = \frac{1}{r^2} \frac{\partial}{\partial r} \left(r^2 \frac{\partial}{\partial r} \right) + \frac{1}{r^2} \frac{1}{\sin \theta} \frac{\partial}{\partial \theta} \left(\sin \theta \frac{\partial}{\partial \theta} \right) + \frac{1}{r^2} \frac{\partial^2}{\partial \phi^2}\tag{7.18}$$

Finally, for integration over these variables we need to know the volume of the small cuboid contained between r and $r + \delta r$, θ and $\theta + \delta \theta$ and ϕ and $\phi + \delta \phi$. The length of the sides due to each of these changes is δr , $r \delta \theta$ and $r \sin \theta \delta \phi$, respectively. We thus conclude that

$$\int_V f(x, y, z) dx dy dz = \int_V f(r, \theta, \phi) r^2 \sin \theta dr d\theta d\phi.\tag{7.19}$$

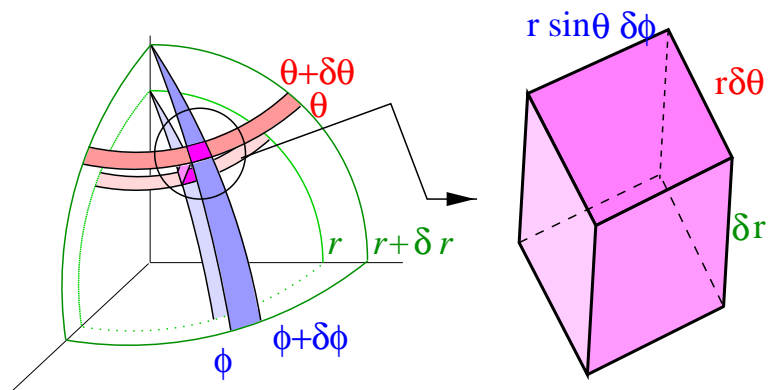


Figure 7.4: Integration in spherical coordinates

Chapter 8

Separation of variables in polar coordinates

Consider a circular plate of radius c m, insulated from above and below. The temperature on the circumference is 100° C on half the circle, and 0° C on the other half.

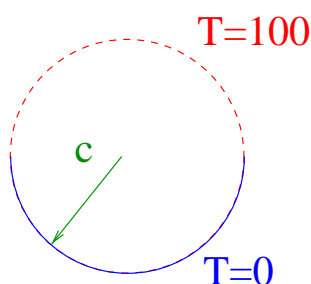


Figure 8.1: The boundary conditions for the temperature on a circular plate.

The differential equation to solve is

$$\rho^2 \frac{\partial^2 u}{\partial \rho^2} + \rho \frac{\partial u}{\partial \rho} + \frac{\partial^2 u}{\partial \phi^2} = 0, \quad (8.1)$$

with boundary conditions

$$u(c, \phi) = \begin{cases} 100 & \text{if } 0 < \phi < \pi \\ 0 & \text{if } \pi < \phi < 2\pi \end{cases}. \quad (8.2)$$

There is no real boundary in the ϕ direction, but we introduce one, since we choose to let ϕ run from 0 to 2π only. So what kind of boundary conditions do we apply? We would like to see “seamless behaviour”, which specifies the periodicity of the solution in ϕ ,

$$u(\rho, \phi + 2\pi) = u(\rho, \phi), \quad (8.3)$$

$$\frac{\partial u}{\partial \phi}(\rho, \phi + 2\pi) = \frac{\partial u}{\partial \phi}(\rho, \phi). \quad (8.4)$$

If we choose to put the seam at $\phi = -\pi$ we have the *periodic* boundary conditions

$$u(\rho, 2\pi) = u(\rho, 0), \quad (8.5)$$

$$\frac{\partial u}{\partial \phi}(\rho, 2\pi) = \frac{\partial u}{\partial \phi}(\rho, 0). \quad (8.6)$$

We separate variables, and take, as usual

$$u(\rho, \phi) = R(\rho)\Phi(\phi). \quad (8.7)$$

This gives the usual differential equations

$$\Phi'' - \lambda\Phi = 0, \quad (8.8)$$

$$\rho^2 R'' + \rho R' + \lambda R = 0. \quad (8.9)$$

Our periodic boundary conditions gives a condition on Φ ,

$$\Phi(0) = \Phi(2\pi), \quad \Phi'(0) = \Phi'(2\pi). \quad (8.10)$$

The other boundary condition involves both R and Φ .

As usual we consider the cases $\lambda > 0$, $\lambda < 0$ and $\lambda = 0$ separately. Consider the Φ equation first, since this has the most restrictive explicit boundary conditions (8.10).

$\lambda = -\alpha^2 < 0$ We have to solve

$$\Phi'' = \alpha^2\Phi, \quad (8.11)$$

which has as a solution

$$\Phi(\phi) = A \cos \alpha\phi + B \sin \alpha\phi. \quad (8.12)$$

Applying the boundary conditions, we get

$$A = A \cos(2\alpha\pi) + B \sin(2\alpha\pi), \quad (8.13)$$

$$B\alpha = -A\alpha \sin(2\alpha\pi) + B\alpha \cos(2\alpha\pi). \quad (8.14)$$

If we eliminate one of the coefficients from the equation, we get

$$A = A \cos(2\alpha\pi) - A \sin(2\alpha\pi)^2 / (1 - \cos(2\alpha\pi)) \quad (8.15)$$

which leads to

$$\sin(2\alpha\pi)^2 = -(1 - \cos(2\alpha\pi))^2, \quad (8.16)$$

which in turn shows

$$2 \cos(2\alpha\pi) = 2, \quad (8.17)$$

and thus we only have a non-zero solution for $\alpha = n$, an integer. We have found

$$\lambda_n = n^2, \quad \Phi_n(\phi) = A_n \cos n\phi + B_n \sin n\phi. \quad (8.18)$$

$\lambda = 0$ We have

$$\Phi'' = 0. \quad (8.19)$$

This implies that

$$\Phi = A\phi + B. \quad (8.20)$$

The boundary conditions are satisfied for $A = 0$,

$$\Phi_0(\phi) = B_n. \quad (8.21)$$

$\lambda > 0$ The solution (hyperbolic sines and cosines) cannot satisfy the boundary conditions.

Now let me look at the solution of the R equation for each of the two cases (they can be treated as one),

$$\rho^2 R''(\rho) + \rho R'(\rho) - n^2 R(\rho) = 0. \quad (8.22)$$

Let us attempt a power-series solution (this method will be discussed in great detail in a future lecture)

$$R(\rho) = \rho^\alpha. \quad (8.23)$$

We find the equation

$$\rho^\alpha [\alpha(\alpha - 1) + \alpha^2 - n^2] = \rho^\alpha [\alpha^2 - n^2] = 0 \quad (8.24)$$

If $n \neq 0$ we thus have two independent solutions (as should be)

$$R_n(\rho) = C\rho^{-n} + D\rho^n \quad (8.25)$$

The term with the negative power of ρ diverges as ρ goes to zero. This is not acceptable for a physical quantity (like the temperature). We keep the regular solution,

$$R_n(\rho) = \rho^n. \quad (8.26)$$

For $n = 0$ we find only one solution, but it is not very hard to show (e.g., by substitution) that the general solution is

$$R_0(\rho) = C_0 + D_0 \ln(\rho). \quad (8.27)$$

We reject the logarithm since it diverges at $\rho = 0$.

In summary, we have

$$u(\rho, \phi) = \frac{A_0}{2} + \sum_{n=1}^{\infty} \rho^n (A_n \cos n\phi + B_n \sin n\phi). \quad (8.28)$$

The one remaining boundary condition can now be used to determine the coefficients A_n and B_n ,

$$\begin{aligned} U(c, \phi) &= \frac{A_0}{2} + \sum_{n=1}^{\infty} c^n (A_n \cos n\phi + B_n \sin n\phi) \\ &= \begin{cases} 100 & \text{if } 0 < \phi < \pi \\ 0 & \text{if } \pi < \phi < 2\pi \end{cases}. \end{aligned} \quad (8.29)$$

We find

$$\begin{aligned} A_0 &= \frac{1}{\pi} \int_0^\pi 100 d\phi = 100, \\ c^n A_n &= \frac{1}{\pi} \int_0^\pi 100 \cos n\phi d\phi = \frac{100}{n\pi} \sin(n\phi)|_0^\pi = 0, \\ c^n B_n &= \frac{1}{\pi} \int_0^\pi 100 \sin n\phi d\phi = -\frac{100}{n\pi} \cos(n\phi)|_0^\pi \\ &= \begin{cases} 200/(n\pi) & \text{if } n \text{ is odd} \\ 0 & \text{if } n \text{ is even} \end{cases}. \end{aligned} \quad (8.30)$$

In summary

$$u(\rho, \phi) = 50 + \frac{200}{\pi} \sum_{n \text{ odd}} \left(\frac{\rho}{c}\right)^n \frac{\sin n\phi}{n}. \quad (8.31)$$

We clearly see the dependence of u on the pure number r/c , rather than ρ . A three dimensional plot of the temperature is given in Fig. 8.2.

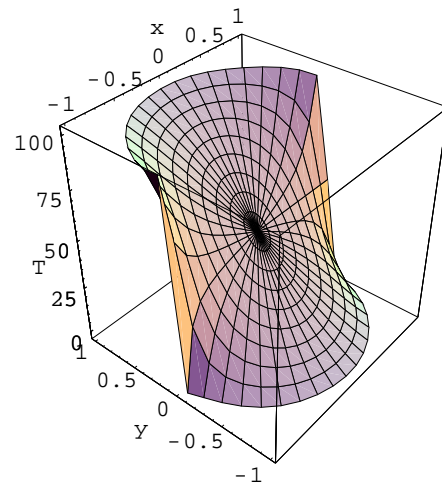


Figure 8.2: The temperature (8.31)

Chapter 9

Series solutions of O.D.E. (Frobenius' method)

Let us look at the a very simple (ordinary) differential equation,

$$y''(t) = t y(t), \quad (9.1)$$

with initial conditions $y(0) = a$, $y'(0) = b$. Let us assume that there is a solution that is analytical near $t = 0$. This means that near $t = 0$ the function has a Taylor's series

$$y(t) = c_0 + c_1 t + \dots = \sum_{k=0}^{\infty} c_k t^k. \quad (9.2)$$

(We shall ignore questions of convergence.) Let us proceed

$$\begin{aligned} y'(t) &= c_1 + 2c_2 t + \dots = \sum_{k=1}^{\infty} k c_k t^{k-1}, \\ y''(t) &= 2c_2 + 3 \cdot 2t + \dots = \sum_{k=2}^{\infty} k(k-1) c_k t^{k-2}, \\ t y(t) &= c_0 t + c_1 t^2 + \dots = \sum_{k=0}^{\infty} c_k t^{k+1}. \end{aligned} \quad (9.3)$$

Combining this together we have

$$\begin{aligned} y'' - t y &= [2c_2 + 3 \cdot 2t + \dots] - [c_0 t + c_1 t^2 + \dots] \\ &= 2c_2 + (3 \cdot 2c_3 - c_0)t + \dots \\ &= 2c_2 + \sum_{k=3}^{\infty} \{k(k-1)c_k - c_{k-3}\} t^{k-2}. \end{aligned} \quad (9.4)$$

Here we have collected terms of equal power of t . The reason is simple. We are requiring a power series to equal 0. The only way that can work is if each power of x in the power series has zero coefficient. (Compare a finite polynomial....) We thus find

$$c_2 = 0, \quad k(k-1)c_k = c_{k-3}. \quad (9.5)$$

The last relation is called a recurrence of recursion relation, which we can use to bootstrap from a given value, in this case c_0 and c_1 . Once we know these two numbers, we can determine c_3, c_4 and c_5 :

$$c_3 = \frac{1}{6}c_0, \quad c_4 = \frac{1}{12}c_1, \quad c_5 = \frac{1}{20}c_2 = 0. \quad (9.6)$$

These in turn can be used to determine c_6, c_7, c_8 , etc. It is not too hard to find an explicit expression for the c 's

$$\begin{aligned}
 c_{3m} &= \frac{3m-2}{(3m)(3m-1)(3m-2)} c_{3(m-1)} \\
 &= \frac{3m-2}{(3m)(3m-1)(3m-2)} \frac{3m-5}{(3m-3)(3m-4)(3m-5)} c_{3(m-1)} \\
 &= \frac{(3m-2)(3m-5)\dots 1}{(3m)!} c_0, \\
 c_{3m+1} &= \frac{3m-1}{(3m+1)(3m)(3m-1)} c_{3(m-1)+1} \\
 &= \frac{3m-1}{(3m+1)(3m)(3m-1)} \frac{3m-4}{(3m-2)(3m-3)(3m-4)} c_{3(m-2)+1} \\
 &= \frac{(3m-2)(3m-5)\dots 2}{(3m+1)!} c_1, \\
 c_{3m+1} &= 0.
 \end{aligned} \tag{9.7}$$

The general solution is thus

$$y(t) = a \left[1 + \sum_{m=1}^{\infty} c_{3m} t^{3m} \right] + b \left[1 + \sum_{m=1}^{\infty} c_{3m+1} t^{3m+1} \right]. \tag{9.8}$$

The technique sketched here can be proven to work for any differential equation

$$y''(t) + p(t)y'(t) + q(t)y(t) = f(t) \tag{9.9}$$

provided that $p(t)$, $q(t)$ and $f(t)$ are analytic at $t = 0$. Thus if p , q and f have a power series expansion, so has y .

9.1 Singular points

As usual there is a snag. Most equations of interest are of a form where p and/or q are *singular* at the point t_0 (usually $t_0 = 0$). Any point t_0 where $p(t)$ and $q(t)$ are singular is called (surprise!) a singular point. Of most interest are a special class of singular points called *regular singular points*, where the differential equation can be given as

$$(t - t_0)^2 y''(t) + (t - t_0)\alpha(t)y'(t) + \beta(t)y(t) = 0, \tag{9.10}$$

with α and β analytic at $t = t_0$. Let us assume that this point is $t_0 = 0$. Frobenius' method consists of the following technique: In the equation

$$x^2 y''(x) + x\alpha(x)y'(x) + \beta(x)y(x) = 0, \tag{9.11}$$

we assume a generalised series solution of the form

$$y(x) = x^\gamma \sum_{n=0}^{\infty} c_n x^n. \tag{9.12}$$

Equating powers of x we find

$$\gamma(\gamma - 1)c_0 x^\gamma + \alpha_0 \gamma c_0 x^\gamma + \beta_0 c_0 x^\gamma = 0, \tag{9.13}$$

etc. The equation for the lowest power of x can be rewritten as

$$\gamma(\gamma - 1) + \alpha_0 \gamma + \beta_0 = 0. \tag{9.14}$$

This is called the indicial equation. It is a quadratic equation in γ , that usually has two (complex) roots. Let me call these γ_1, γ_2 . If $\gamma_1 - \gamma_2$ is not integer one can prove that the two series solutions for y with these two values of γ are independent solutions.

Let us look at an example

$$t^2 y''(t) + \frac{3}{2} t y'(t) + t y = 0. \quad (9.15)$$

Here $\alpha(t) = 3/2$, $\beta(t) = t$, so $t = 0$ is indeed a regular singular point. The indicial equation is

$$\gamma(\gamma - 1) + \frac{3}{2}\gamma = \gamma^2 + \gamma/2 = 0. \quad (9.16)$$

which has roots $\gamma_1 = 0$, $\gamma_2 = -1/2$, which gives two independent solutions

$$\begin{aligned} y_1(t) &= \sum_k c_k t^k, \\ y_2(t) &= t^{-1/2} \sum_k d_k t^k. \end{aligned}$$

Independent solutions:

Independent solutions are really very similar to independent vectors: Two or more functions are independent if none of them can be written as a combination of the others. Thus x and 1 are independent, and $1 + x$ and $2 + x$ are dependent.

9.2 *Special cases

For the two special cases I will just give the solution. It requires a substantial amount of algebra to study these two cases.

9.2.1 Two equal roots

If the indicial equation has two equal roots, $\gamma_1 = \gamma_2$, we have one solution of the form

$$y_1(t) = t^{\gamma_1} \sum_{n=0}^{\infty} c_n t^n. \quad (9.17)$$

The other solution takes the form

$$y_2(t) = y_1(t) \ln t + t^{\gamma_1+1} \sum_{n=0}^{\infty} d_n t^n. \quad (9.18)$$

Notice that this last solution is always singular at $t = 0$, whatever the value of γ_1 !

9.2.2 Two roots differing by an integer

If the indicial equation that differ by an integer, $\gamma_1 - \gamma_2 = n > 0$, we have one solution of the form

$$y_1(t) = t^{\gamma_1} \sum_{n=0}^{\infty} c_n t^n. \quad (9.19)$$

The other solution takes the form

$$y_2(t) = a y_1(t) \ln t + t^{\gamma_2} \sum_{n=0}^{\infty} d_n t^n. \quad (9.20)$$

The constant a is determined by substitution, and in a few relevant cases is even 0, so that the solutions can be of the generalised series form.

9.2.3 Example 1

Find two independent solutions of

$$t^2 y'' + ty' + ty = 0 \quad (9.21)$$

near $t = 0$. The indicial equation is $\gamma^2 = 0$, so we get one solution of the series form

$$y_1(t) = \sum_n c_n t^n. \quad (9.22)$$

We find

$$\begin{aligned} t^2 y_1'' &= \sum_n n(n-1)c_n t^n \\ ty_1' &= \sum_n n c_n t^n \\ ty_1 &= \sum_n c_n t^{n+1} = \sum_{n'} c_{n'-1} t^{n'} \end{aligned} \quad (9.23)$$

We add terms of equal power in x ,

$$\begin{array}{rcccccccc} t^2 y_1'' &= & 0 & + & 0t & & + & 2c_2 t^2 & & + & 6c_3 t^3 & & + & \dots \\ ty_1' &= & 0 & + & c_1 t & & + & 2c_2 t^2 & & + & 3c_3 t^3 & & + & \dots \\ ty_1 &= & 0 & + & c_0 t & & + & c_1 t^2 & & + & c_2 t^3 & & + & \dots \\ \hline t^2 y'' + ty' + ty &= & 0 & + & (c_1 + c_0)t & & + & (4c_2 + c_1)t^2 & & + & (9c_3 + c_2)t^3 & & + & \dots \end{array} \quad (9.24)$$

Both of these ways give

$$t^2 y'' + ty' + ty = \sum_{n=1}^{\infty} (c_n n^2 + c_{n-1}) t^n, \quad (9.25)$$

and lead to the recurrence relation

$$c_n = -\frac{1}{n^2} c_{n-1} \quad (9.26)$$

which has the solution

$$c_n = (-1)^n \frac{1}{n!^2} \quad (9.27)$$

and thus

$$y_1(t) = \sum_{n=0}^{\infty} (-1)^n \frac{1}{n!^2} x^n \quad (9.28)$$

Let us look at the second solution

$$y_2(t) = \ln(t)y_1(t) + t \underbrace{\sum_{n=0}^{\infty} d_n t^n}_{y_3(t)} \quad (9.29)$$

Her I replace the power series with a symbol, y_3 for convenience. We find

$$\begin{aligned} y_2' &= \ln(t)y_1' + \frac{y_1(t)}{t} + y_3' \\ y_2'' &= \ln(t)y_1'' + \frac{2y_1'(t)}{t} - \frac{y_1(t)}{t^2} + y_3'' \end{aligned} \quad (9.30)$$

Taking all this together, we have,

$$\begin{aligned} t^2 y_2'' + ty_2' + ty_2 &= \ln(t)(t^2 y_1'' + ty_1' + ty_1) - y_1 + 2ty_1' + y_1 + t^2 y_3'' + ty_3' + y_3 \\ &= 2ty_1' + t^2 y_3'' + ty_3' + ty_3 = 0. \end{aligned} \quad (9.31)$$

If we now substitute the series expansions for y_1 and y_3 we get

$$2c_n + d_n(n+1)^2 + d_{n-1} = 0, \quad (9.32)$$

which can be manipulated to the form

—————stuff missing !!!!! —————

9.2.4 Example 2

Find two independent solutions of

$$t^2 y'' + t^2 y' - ty = 0 \quad (9.33)$$

near $t = 0$.

The indicial equation is $\alpha(\alpha - 1) = 0$, so that we have two roots differing by an integer. The solution for $\alpha = 1$ is $y_1 = t$, as can be checked by substitution. The other solution should be found in the form

$$y_2(t) = at \ln t + \sum_{k=0} d_k t^k \quad (9.34)$$

We find

$$\begin{aligned} y_2' &= a + a \ln t + \sum_{k=0} k d_k t^{k-1} \\ y_2'' &= a/t + \sum_{k=0} k(k-1) d_k t^{k-2} \end{aligned} \quad (9.35)$$

We thus find

$$t^2 y_2'' + t^2 y_2' - t y_2 = a(t + t^2) + \sum_{k=2}^{\infty} [d_k k(k-1) + d_{k-1}(k-2)] t^k \quad (9.36)$$

We find

$$d_0 = a, \quad 2d_2 + a = 0, \quad d_k = (k-2)/(k(k-1))d_{k-1} \quad (k > 2) \quad (9.37)$$

On fixing $d_0 = 1$ we find

$$y_2(t) = 1 + t \ln t + \sum_{k=2}^{\infty} \frac{1}{(k-1)!k!} (-1)^{k+1} t^k \quad (9.38)$$

Chapter 10

Bessel functions and two-dimensional problems

10.1 Temperature on a disk

Let us now turn to a different two-dimensional problem. A circular disk is prepared in such a way that its initial temperature is radially symmetric,

$$u(\rho, \phi, t = 0) = f(\rho). \quad (10.1)$$

Then it is placed between two perfect insulators and its circumference is connected to a freezer that keeps it at 0° C, as sketched in Fig. 10.2.

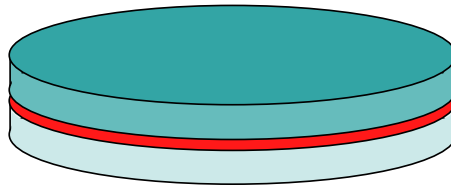


Figure 10.1: A circular plate, insulated from above and below.

Since the initial conditions do not depend on ϕ , we expect the solution to be radially symmetric as well, $u(\rho, t)$, which satisfies the equation

$$\begin{aligned} \frac{\partial u}{\partial t} &= k \left[\frac{\partial^2 u}{\partial \rho^2} + \frac{1}{\rho} \frac{\partial u}{\partial \rho} \right], \\ u(c, t) &= 0, \\ u(\rho, 0) &= f(\rho). \end{aligned} \quad (10.2)$$

Once again we separate variables, $u(\rho, t) = R(\rho)T(t)$, which leads to the equation

$$\frac{1}{k} \frac{T'}{T} = \frac{R'' + \frac{1}{\rho} R'}{R} = -\lambda. \quad (10.3)$$

This corresponds to the two equations

$$\begin{aligned} \rho^2 R'' + \rho R' + \lambda \rho^2 R &= 0, \quad R(c) = 0 \\ T' + \lambda k T &= 0. \end{aligned} \quad (10.4)$$

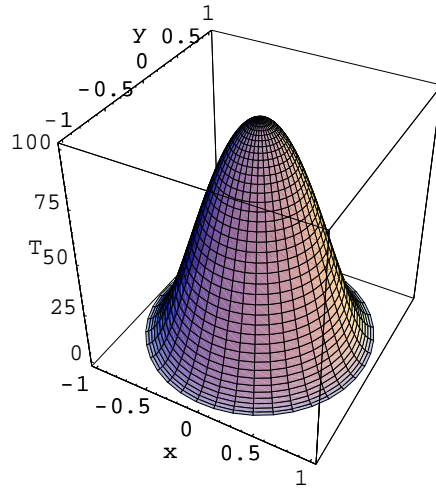


Figure 10.2: The initial temperature in the disk.

The radial equation (which has a regular singular point at $\rho = 0$) is closely related to one of the most important equation of mathematical physics, Bessel's equation. This equation can be reached from the substitution $\rho = x/\sqrt{\lambda}$, so that with $R(r) = X(x)$ we get the equation

$$x^2 \frac{d^2}{dx^2} X(x) + x \frac{d}{dx} X(x) + x^2 X(x) = 0, \quad X(\sqrt{\lambda}c) = 0. \quad (10.5)$$

10.2 Bessel's equation

Bessel's equation of order ν is given by

$$x^2 y'' + xy' + (x^2 - \nu^2)y = 0. \quad (10.6)$$

Clearly $x = 0$ is a regular singular point, so we can solve by Frobenius' method. The indicial equation is obtained from the lowest power after the substitution $y = x^\gamma$, and is

$$\gamma^2 - \nu^2 = 0 \quad (10.7)$$

So a generalised series solution gives two independent solutions if $\nu \neq \frac{1}{2}n$. Now let us solve the problem and explicitly substitute the power series,

$$y = x^\nu \sum_n a_n x^n. \quad (10.8)$$

From Bessel's equation we find

$$\sum_n (n + \nu)(n + \nu - 1)a_n x^{m+\nu} + \sum_n (n + \nu)a_n x^{m+\nu} + \sum_n (x^2 - \nu^2)a_n = 0 \quad (10.9)$$

which leads to

$$[(m + \nu)^2 - \nu^2]a_m = -a_{m-2} \quad (10.10)$$

or

$$a_m = -\frac{1}{m(m + 2\nu)} a_{m-2}. \quad (10.11)$$

If we take $\nu = n > 0$, we have

$$a_m = -\frac{1}{m(m+2n)}a_{m-2}. \quad (10.12)$$

This can be solved by iteration,

$$\begin{aligned} a_{2k} &= -\frac{1}{4} \frac{1}{k(k+n)} a_{2(k-1)} \\ &= \left(\frac{1}{4}\right)^2 \frac{1}{k(k-1)(k+n)(k+n-1)} a_{2(k-2)} \\ &= \left(-\frac{1}{4}\right)^k \frac{n!}{k!(k+n)!} a_0. \end{aligned} \quad (10.13)$$

If we choose¹ $a_0 = \frac{1}{n!2^n}$ we find the Bessel function of order n

$$J_n(x) = \sum_{k=0}^{\infty} \frac{(-1)^k}{k!(k+n)!} \left(\frac{x}{2}\right)^{2k+n}. \quad (10.14)$$

There is another second independent solution (which should have a logarithm in it) with goes to infinity at $x = 0$.

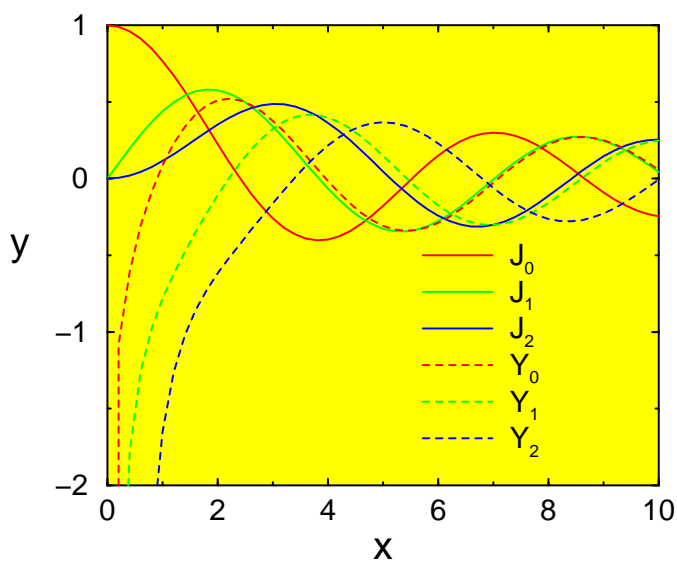


Figure 10.3: A plot of the first three Bessel functions J_n and Y_n .

The general solution of Bessel's equation of order n is a linear combination of J and Y ,

$$y(x) = AJ_n(x) + BY_n(x). \quad (10.15)$$

¹This can be done since Bessel's equation is linear, i.e., if $g(x)$ is a solution $Cg(x)$ is also a solution.

10.3 Gamma function

For ν not an integer the recursion relation for the Bessel function generates something very similar to factorials. These quantities are most easily expressed in something called a Gamma-function, defined as

$$\Gamma(\nu) = \int_0^{\infty} e^{-t} t^{\nu-1} dt, \quad \nu > 0. \quad (10.16)$$

Some special properties of Γ function now follow immediately:

$$\begin{aligned} \Gamma(1) &= \int_0^{\infty} e^{-t} dt = -e^{-1} \Big|_0^{\infty} = 1 - e^{-\infty} = 1 \\ \Gamma(\nu) &= \int_0^{\infty} e^{-t} t^{\nu-1} dt = - \int_0^{\infty} \frac{de^{-t}}{dt} t^{\nu-1} dt \\ &= -e^{-t} t^{\nu-1} \Big|_0^{\infty} + (\nu-1) \int_0^{\infty} e^{-t} t^{\nu-2} dt \end{aligned} \quad (10.17)$$

The first term is zero, and we obtain

$$\Gamma(\nu) = (\nu-1)\Gamma(\nu-1) \quad (10.18)$$

From this we conclude that

$$\Gamma(2) = 1 \cdot 1 = 1, \quad \Gamma(3) = 2 \cdot 1 \cdot 1 = 2, \quad \Gamma(4) = 3 \cdot 2 \cdot 1 \cdot 1 = 2, \quad \Gamma(n) = (n-1)! \quad (10.19)$$

Thus for integer argument the Γ function is nothing but a factorial, but it also defined for other arguments. This is the sense in which Γ generalises the factorial to non-integer arguments. One should realize that once one knows the Γ function between the values of its argument of, say, 1 and 2, one can evaluate any value of the Γ function through recursion. Given that $\Gamma(1.65) = 0.9001168163$ we find

$$\Gamma(3.65) = 2.65 \times 1.65 \times 0.9001168163 = 3.935760779. \quad (10.20)$$

Question: Evaluate $\Gamma(3)$, $\Gamma(11)$, $\Gamma(2.65)$.

Answer: $2! = 2$, $10! = 3628800$, $1.65 \times 0.9001168163 = 1.485192746$.

We also would like to determine the Γ function for $\nu < 1$. One can invert the recursion relation to read

$$\Gamma(\nu-1) = \frac{\Gamma(\nu)}{\nu-1}, \quad (10.21)$$

$$\Gamma(0.7) = \Gamma(1.7)/0.7 = 0.909/0.7 = 1.30.$$

What is $\Gamma(\nu)$ for $\nu < 0$? Let us repeat the recursion derived above and find

$$\Gamma(-1.3) = \frac{\Gamma(-0.3)}{-1.3} = \frac{\Gamma(0.7)}{-1.3 \times -0.3} = \frac{\Gamma(1.7)}{0.7 \times -0.3 \times -1.3} = 3.33. \quad (10.22)$$

This works for any value of the argument that is not an integer. If the argument is integer we get into problems. Look at $\Gamma(0)$. For small positive ϵ

$$\Gamma(\pm\epsilon) = \frac{\Gamma(1 \pm \epsilon)}{\pm\epsilon} = \pm \frac{1}{\epsilon} \rightarrow \pm\infty. \quad (10.23)$$

Thus $\Gamma(n)$ is not defined for $n \leq 0$. This can be easily seen in the graph of the Γ function, Fig. 10.4.

Finally, in physical problems one often uses $\Gamma(1/2)$,

$$\Gamma\left(\frac{1}{2}\right) = \int_0^{\infty} e^{-t} t^{-1/2} dt = 2 \int_0^{\infty} e^{-t} dt^{1/2} = 2 \int_0^{\infty} e^{-x^2} dx. \quad (10.24)$$

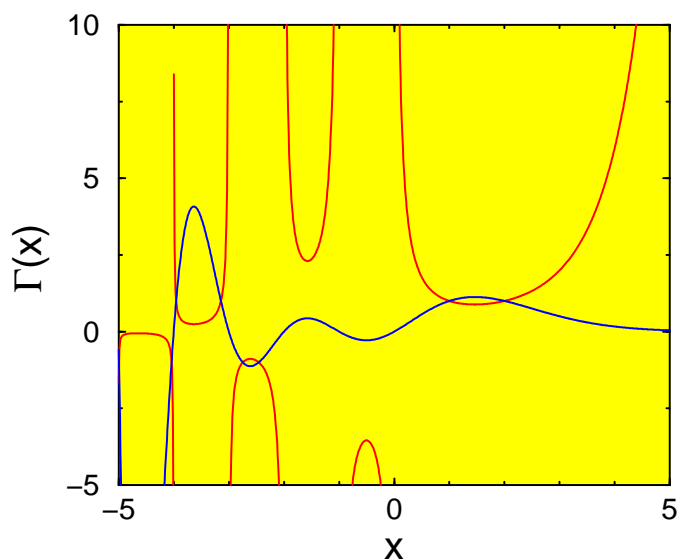


Figure 10.4: A graph of the Γ function (solid line). The inverse $1/\Gamma$ is also included (dashed line). Note that this last function is not discontinuous.

This can be evaluated by a very smart trick, we first evaluate $\Gamma(1/2)^2$ using polar coordinates

$$\begin{aligned}\Gamma\left(\frac{1}{2}\right)^2 &= 4 \int_0^\infty e^{-x^2} dx \int_0^\infty e^{-y^2} dy \\ &= 4 \int_0^\infty \int_0^{\pi/2} e^{-\rho^2} \rho d\rho d\phi = \pi.\end{aligned}\tag{10.25}$$

(See the discussion of polar coordinates in Sec. 7.1.) We thus find

$$\Gamma(1/2) = \sqrt{\pi}, \quad \Gamma(3/2) = \frac{1}{2}\sqrt{\pi}, \quad \text{etc.}\tag{10.26}$$

10.4 Bessel functions of general order

The recurrence relation for the Bessel function of general order $\pm\nu$ can now be solved by using the gamma function,

$$a_m = -\frac{1}{m(m \pm 2\nu)} a_{m-2}\tag{10.27}$$

has the solutions ($x > 0$)

$$J_\nu(x) = \sum_{k=0}^{\infty} \frac{(-1)^k}{k! \Gamma(\nu + k + 1)} \left(\frac{x}{2}\right)^{\nu+2k},\tag{10.28}$$

$$J_{-\nu}(x) = \sum_{k=0}^{\infty} \frac{(-1)^k}{k! \Gamma(-\nu + k + 1)} \left(\frac{x}{2}\right)^{-\nu+2k}.\tag{10.29}$$

The general solution to Bessel's equation of order ν is thus

$$y(x) = AJ_\nu(x) + BJ_{-\nu}(x),\tag{10.30}$$

for any non-integer value of ν . This also holds for half-integer values (no logs).

10.5 Properties of Bessel functions

Bessel functions have many interesting properties:

$$J_0(0) = 1, \quad (10.31)$$

$$J_\nu(x) = 0 \quad (\text{if } \nu > 0), \quad (10.32)$$

$$J_{-n}(x) = (-1)^n J_n(x), \quad (10.33)$$

$$\frac{d}{dx} [x^{-\nu} J_\nu(x)] = -x^{-\nu} J_{\nu+1}(x), \quad (10.34)$$

$$\frac{d}{dx} [x^\nu J_\nu(x)] = x^\nu J_{\nu-1}(x), \quad (10.35)$$

$$\frac{d}{dx} [J_\nu(x)] = \frac{1}{2} [J_{\nu-1}(x) - J_{\nu+1}(x)], \quad (10.36)$$

$$x J_{\nu+1}(x) = 2\nu J_\nu(x) - x J_{\nu-1}(x), \quad (10.37)$$

$$\int x^{-\nu} J_{\nu+1}(x) dx = -x^{-\nu} J_\nu(x) + C, \quad (10.38)$$

$$\int x^\nu J_{\nu-1}(x) dx = x^\nu J_\nu(x) + C. \quad (10.39)$$

Let me prove a few of these. First notice from the definition that $J_n(x)$ is even or odd if n is even or odd,

$$J_n(x) = \sum_{k=0}^{\infty} \frac{(-1)^k}{k!(n+k)!} \left(\frac{x}{2}\right)^{n+2k}. \quad (10.40)$$

Substituting $x = 0$ in the definition of the Bessel function gives 0 if $\nu > 0$, since in that case we have the sum of positive powers of 0, which are all equally zero.

Let's look at J_{-n} :

$$\begin{aligned} J_{-n}(x) &= \sum_{k=0}^{\infty} \frac{(-1)^k}{k!\Gamma(-n+k+1)!} \left(\frac{x}{2}\right)^{n+2k} \\ &= \sum_{k=n}^{\infty} \frac{(-1)^k}{k!\Gamma(-n+k+1)!} \left(\frac{x}{2}\right)^{-n+2k} \\ &= \sum_{l=0}^{\infty} \frac{(-1)^{l+n}}{(l+n)!l!} \left(\frac{x}{2}\right)^{n+2l} \\ &= (-1)^n J_n(x). \end{aligned} \quad (10.41)$$

Here we have used the fact that since $\Gamma(-l) = \pm\infty$, $1/\Gamma(-l) = 0$ [this can also be proven by defining a recurrence relation for $1/\Gamma(l)$]. Furthermore we changed summation variables to $l = -n + k$.

The next one:

$$\begin{aligned}
\frac{d}{dx} [x^{-\nu} J_\nu(x)] &= 2^{-\nu} \frac{d}{dx} \left\{ \sum_{k=0}^{\infty} \frac{(-1)^k}{k! \Gamma(\nu + k + 1)} \left(\frac{x}{2}\right)^{2k} \right\} \\
&= 2^{-\nu} \sum_{k=1}^{\infty} \frac{(-1)^k}{(k-1)! \Gamma(\nu + k + 1)} \left(\frac{x}{2}\right)^{2k-1} \\
&= -2^{-\nu} \sum_{l=0}^{\infty} \frac{(-1)^l}{(l)! \Gamma(\nu + l + 2)} \left(\frac{x}{2}\right)^{2l+1} \\
&= -2^{-\nu} \sum_{l=0}^{\infty} \frac{(-1)^l}{(l)! \Gamma(\nu + 1 + l + 1)} \left(\frac{x}{2}\right)^{2l+1} \\
&= -x^{-\nu} \sum_{l=0}^{\infty} \frac{(-1)^l}{(l)! \Gamma(\nu + 1 + l + 1)} \left(\frac{x}{2}\right)^{2l+\nu+1} \\
&= -x^{-\nu} J_{\nu+1}(x).
\end{aligned} \tag{10.42}$$

Similarly

$$\frac{d}{dx} [x^\nu J_\nu(x)] = x^\nu J_{\nu-1}(x). \tag{10.43}$$

The next relation can be obtained by evaluating the derivatives in the two equations above, and solving for $J_\nu(x)$:

$$x^{-\nu} J'_\nu(x) - \nu x^{-\nu-1} J_\nu(x) = -x^{-\nu} J_{\nu+1}(x), \tag{10.44}$$

$$x^\nu J'_\nu(x) + \nu x^{\nu-1} J_\nu(x) = x^\nu J_{\nu-1}(x). \tag{10.45}$$

Multiply the first equation by x^ν and the second one by $x^{-\nu}$ and add:

$$-2\nu \frac{1}{x} J_\nu(x) = -J_{\nu+1}(x) + J_{\nu-1}(x). \tag{10.46}$$

After rearrangement of terms this leads to the desired expression.

Eliminating J_ν between the equations gives (same multiplication, take difference instead)

$$2J'_\nu(x) = J_{\nu+1}(x) + J_{\nu-1}(x). \tag{10.47}$$

Integrating the differential relations leads to the integral relations.

Bessel function are an inexhaustible subject – there are always more useful properties than one knows. In mathematical physics one often uses specialist books.

10.6 Sturm-Liouville theory

In the end we shall want to write a solution to an equation as a series of Bessel functions. In order to do that we shall need to understand about orthogonality of Bessel function – just as sines and cosines were orthogonal. This is most easily done by developing a mathematical tool called Sturm-Liouville theory. It starts from an equation in the so-called self-adjoint form

$$[r(x)y'(x)]' + [p(x) + \lambda s(x)]y(x) = 0 \tag{10.48}$$

where λ is a number, and $r(x)$ and $s(x)$ are greater than 0 on $[a, b]$. We apply the boundary conditions

$$\begin{aligned}
a_1 y(a) + a_2 y'(a) &= 0, \\
b_1 y(b) + b_2 y'(b) &= 0,
\end{aligned} \tag{10.49}$$

with a_1 and a_2 not both zero, and b_1 and b_2 similar.

Theorem 1. *If there is a solution to (10.48) then λ is real.*

Proof. Assume that λ is a complex number ($\lambda = \alpha + i\beta$) with solution Φ . By complex conjugation we find that

$$\begin{aligned} [r(x)\Phi'(x)]' + [p(x) + \lambda s(x)]\Phi(x) &= 0 \\ [r(x)(\Phi^*)'(x)]' + [p(x) + \lambda^* s(x)](\Phi^*)(x) &= 0 \end{aligned} \quad (10.50)$$

where $*$ note complex conjugation. Multiply the first equation by $\Phi^*(x)$ and the second by $\Phi(x)$, and subtract the two equations:

$$(\lambda^* - \lambda)s(x)\Phi^*(x)\Phi(x) = \Phi(x)[r(x)(\Phi^*)'(x)]' - \Phi^*(x)[r(x)\Phi'(x)]'. \quad (10.51)$$

Now integrate over x from a to b and find

$$(\lambda^* - \lambda) \int_a^b s(x)\Phi^*(x)\Phi(x) dx = \int_a^b \Phi(x)[r(x)(\Phi^*)'(x)]' - \Phi^*(x)[r(x)\Phi'(x)]' dx \quad (10.52)$$

The second part can be integrated by parts, and we find

$$\begin{aligned} (\lambda^* - \lambda) \int_a^b s(x)\Phi^*(x)\Phi(x) dx &= [\Phi'(x)r(x)(\Phi^*)'(x) - \Phi^*(x)r(x)\Phi'(x)]_a^b \\ &= r(b) [\Phi'(b)(\Phi^*)'(b) - \Phi^*(b)\Phi'(b)] \\ &\quad - r(a) [\Phi'(a)(\Phi^*)'(a) - \Phi^*(a)\Phi'(a)] \\ &= 0, \end{aligned} \quad (10.53)$$

where the last step can be done using the boundary conditions. Since both $\Phi^*(x)\Phi(x)$ and $s(x)$ are greater than zero we conclude that $\int_a^b s(x)\Phi^*(x)\Phi(x) dx > 0$, which can now be divided out of the equation to lead to $\lambda = \lambda^*$. \square

Theorem 2. *Let Φ_n and Φ_m be two solutions for different values of λ , $\lambda_n \neq \lambda_m$, then*

$$\int_a^b s(x)\Phi_n(x)\Phi_m(x) dx = 0. \quad (10.54)$$

Proof. The proof is to a large extent identical to the one above: multiply the equation for $\Phi_n(x)$ by $\Phi_m(x)$ and vice-versa. Subtract and find

$$(\lambda_n - \lambda_m) \int_a^b s(x)\Phi_m(x)\Phi_n(x) dx = 0 \quad (10.55)$$

which leads us to conclude that

$$\int_a^b s(x)\Phi_n(x)\Phi_m(x) dx = 0. \quad (10.56)$$

\square

Theorem 3. *Under the conditions set out above*

a) *There exists a real infinite set of eigenvalues $\lambda_0, \dots, \lambda_n, \dots$ with $\lim_{n \rightarrow \infty} \lambda_n = \infty$.*

b) *If Φ_n is the eigenfunction corresponding to λ_n , it has exactly n zeroes in $[a, b]$. **No proof shall be given.***

Clearly the Bessel equation is of self-adjoint form: rewrite

$$x^2 y'' + xy' + (x^2 - \nu^2)y = 0 \quad (10.57)$$

as (divide by x)

$$[xy']' + (x - \frac{\nu^2}{x})y = 0 \tag{10.58}$$

We cannot identify ν with λ , and we do not have positive weight functions. It can be proven from properties of the equation that the Bessel functions have an infinite number of zeroes on the interval $[0, \infty)$. A small list of these:

$$\begin{array}{lclclcl} J_0 & : & 2.42 & 5.52 & 8.65 & 11.79 & \dots \\ J_{1/2} & : & \pi & 2\pi & 3\pi & 4\pi & \dots \\ J_8 & : & 11.20 & 16.04 & 19.60 & 22.90 & \dots \end{array} \tag{10.59}$$

10.7 Our initial problem and Bessel functions

We started the discussion from the problem of the temperature on a circular disk, solved in polar coordinates, Since the initial conditions do not depend on ϕ , we expect the solution to be radially symmetric as well, $u(\rho, t)$, which satisfies the equation

$$\begin{aligned} \frac{\partial u}{\partial t} &= k \left[\frac{\partial^2 u}{\partial \rho^2} + \frac{1}{\rho} \frac{\partial u}{\partial \rho} \right], \\ u(c, t) &= 0, \\ u(\rho, 0) &= f(\rho). \end{aligned} \tag{10.60}$$

With $u(\rho, t) = R(\rho)T(t)$ we found the equations

$$\begin{aligned} \rho^2 R'' + \rho R' + \lambda \rho^2 R &= 0 \quad R(c) = 0 \\ T' + \lambda k T &= 0. \end{aligned} \tag{10.61}$$

The equation for R is clearly self-adjoint, it can be written as

$$[\rho R']' + \lambda \rho R = 0 \tag{10.62}$$

So how does the equation for R relate to Bessel's equation? Let us make the change of variables $x = \sqrt{\lambda} \rho$. We find

$$\frac{d}{d\rho} = \sqrt{\lambda} \frac{d}{dx}, \tag{10.63}$$

and we can remove a common factor $\sqrt{\lambda}$ to obtain ($X(x) = R(\rho)$)

$$[xX']' + xX = 0, \tag{10.64}$$

which is Bessel's equation of order 0, i.e.,

$$R(\rho) = J_0(\rho\sqrt{\lambda}). \tag{10.65}$$

The boundary condition $R(c) = 0$ shows that

$$c\sqrt{\lambda_n} = x_n, \tag{10.66}$$

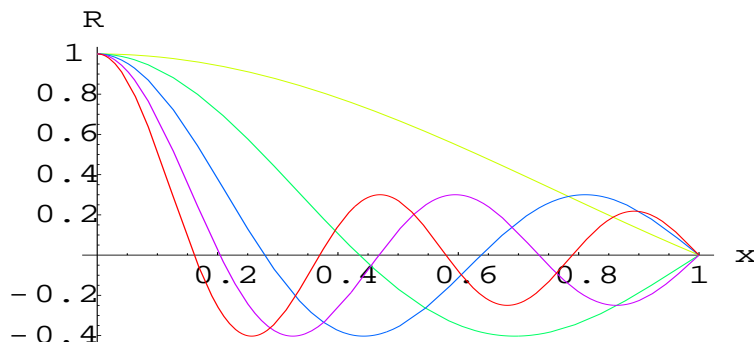
where x_n are the points where $J_0(x) = 0$. We thus conclude

$$R_n(\rho) = J_0(\rho\sqrt{\lambda_n}). \tag{10.67}$$

the first five solutions R_n (for $c = 1$) are shown in Fig. 10.5.

From Sturm-Liouville theory we conclude that

$$\int_0^\infty \rho d\rho R_n(\rho)R_m(\rho) = 0 \text{ if } n \neq m. \tag{10.68}$$

Figure 10.5: A graph of the first five functions R_n

Together with the solution for the T equation,

$$T_n(t) = \exp(-\lambda_n kt) \quad (10.69)$$

we find a Fourier-Bessel series type solution

$$u(\rho, t) = \sum_{n=1}^{\infty} A_n J_0(\rho \sqrt{\lambda_n}) \exp(-\lambda_n kt), \quad (10.70)$$

with $\lambda_n = (x_n/c)^2$.

In order to understand how to determine the coefficients A_n from the initial condition $u(\rho, 0) = f(\rho)$ we need to study Fourier-Bessel series in a little more detail.

10.8 Fourier-Bessel series

So how can we determine in general the coefficients in the Fourier-Bessel series

$$f(\rho) = \sum_{j=1}^{\infty} C_j J_\nu(\alpha_j \rho)? \quad (10.71)$$

The corresponding self-adjoint version of Bessel's equation is easily found to be (with $R_j(\rho) = J_\nu(\alpha_j \rho)$)

$$(\rho R_j')' + (\alpha_j^2 \rho - \frac{\nu^2}{\rho}) R_j = 0. \quad (10.72)$$

Where we assume that f and R satisfy the boundary condition

$$\begin{aligned} b_1 f(c) + b_2 f'(c) &= 0 \\ b_1 R_j(c) + b_2 R_j'(c) &= 0 \end{aligned} \quad (10.73)$$

From Sturm-Liouville theory we do know that

$$\int_0^c \rho J_\nu(\alpha_i \rho) J_\nu(\alpha_j \rho) = 0 \text{ if } i \neq j, \quad (10.74)$$

but we shall also need the values when $i = j$!

Let us use the self-adjoint form of the equation, and multiply with $2\rho R'$, and integrate over ρ from 0 to c ,

$$\int_0^c \left[(\rho R'_j)' + \left(\alpha_j^2 \rho - \frac{\nu^2}{\rho} \right) R_j \right] 2\rho R'_j d\rho = 0. \quad (10.75)$$

This can be brought to the form (integrate the first term by parts, bring the other two terms to the right-hand side)

$$\int_0^c \frac{d}{d\rho} (\rho R'_j)^2 d\rho = 2\nu^2 \int_0^c R_j R'_j d\rho - 2\alpha_j^2 \int_0^c \rho^2 R_j R'_j d\rho \quad (10.76)$$

$$(\rho R'_j)^2 \Big|_0^c = \nu^2 R_j^2 \Big|_0^c - 2\alpha_j^2 \int_0^c \rho^2 R_j R'_j d\rho. \quad (10.77)$$

The last integral can now be done by parts:

$$2 \int_0^c \rho^2 R_j R'_j d\rho = -2 \int_0^c \rho R_j^2 d\rho + \rho R_j^2 \Big|_0^c. \quad (10.78)$$

So we finally conclude that

$$2\alpha_j^2 \int_0^c \rho R_j^2 d\rho = \left[(\alpha_j^2 \rho^2 - \nu^2) R_j^2 + (\rho R'_j)^2 \right]_0^c. \quad (10.79)$$

In order to make life not too complicated we shall only look at boundary conditions where $f(c) = R(c) = 0$. The other cases (mixed or purely $f'(c) = 0$) go very similar! Using the fact that $R_j(r) = J_\nu(\alpha_j \rho)$, we find

$$R'_j = \alpha_j J'_\nu(\alpha_j \rho). \quad (10.80)$$

We conclude that

$$\begin{aligned} 2\alpha_j^2 \int_0^c \rho^2 R_j^2 d\rho &= \left[(\rho \alpha_j J'_\nu(\alpha_j \rho))^2 \right]_0^c \\ &= c^2 \alpha_j^2 (J'_\nu(\alpha_j c))^2 \\ &= c^2 \alpha_j^2 \left(\frac{\nu}{\alpha_j c} J_\nu(\alpha_j c) - J_{\nu+1}(\alpha_j c) \right)^2 \\ &= c^2 \alpha_j^2 (J_{\nu+1}(\alpha_j c))^2, \end{aligned} \quad (10.81)$$

We thus finally have the result

$$\int_0^c \rho^2 R_j^2 d\rho = \frac{c^2}{2} J_{\nu+1}^2(\alpha_j c). \quad (10.82)$$

Example 10.1:

Consider the function

$$f(x) = \begin{cases} x^3 & 0 < x < 10 \\ 0 & x > 10 \end{cases} \quad (10.83)$$

Expand this function in a Fourier-Bessel series using J_3 .

Solution:

From our definitions we find that

$$f(x) = \sum_{j=1}^{\infty} A_j J_3(\alpha_j x), \quad (10.84)$$

with

$$\begin{aligned}
 A_j &= \frac{2}{100J_4(10\alpha_j)^2} \int_0^{10} x^3 J_3(\alpha_j x) dx \\
 &= \frac{2}{100J_4(10\alpha_j)^2} \frac{1}{\alpha_j^5} \int_0^{10\alpha_j} s^4 J_3(s) ds \\
 &= \frac{2}{100J_4(10\alpha_j)^2} \frac{1}{\alpha_j^5} (10\alpha_j)^4 J_4(10\alpha_j) ds \\
 &= \frac{200}{\alpha_j J_4(10\alpha_j)}. \tag{10.85}
 \end{aligned}$$

Using $\alpha_j = \dots$, we find that the first five values of A_j are 1050.95, -821.503 , 703.991, -627.577 , 572.301. The first five partial sums are plotted in Fig. 10.6.

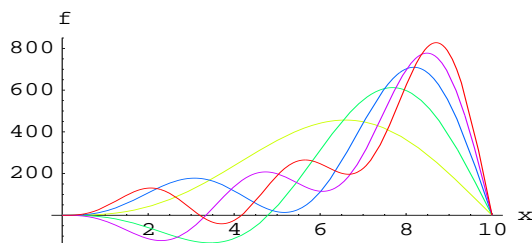


Figure 10.6: A graph of the first five partial sums for x^3 expressed in J_3 .

10.9 Back to our initial problem

After all that we have learned, we know that in order to determine the solution of the initial problem in Sec. 10.1 we would have to calculate the integrals

$$A_j = \frac{2}{c^2 J_1^2(c\alpha_j)} \int_0^c f(\rho) J_0(\alpha_j \rho) \rho d\rho \tag{10.86}$$

Chapter 11

Separation of variables in three dimensions

We have up to now concentrated on 2D problems, but a lot of physics is three dimensional, and often we have spherical symmetry – that means symmetry for rotation over any angle. In these cases we use spherical coordinates, as indicated in figure 7.3.

11.1 Modelling the eye

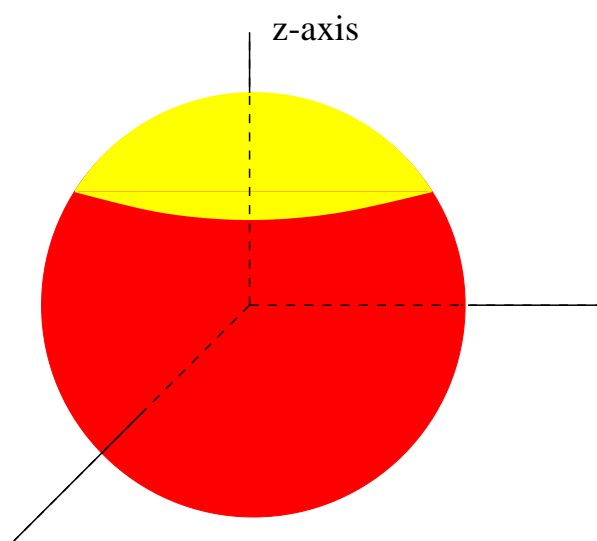


Figure 11.1: The temperature in a simple model of the eye

Let me model the temperature in a simple model of the eye, where the eye is a sphere, and the eyelids are circular. In that case we can put the z -axis straight through the middle of the eye, and we can assume that the temperature does only depend on r, θ and *not* on ϕ . We assume that the part of the eye in contact with air is at a temperature of 20° C, and the part in contact with the body is at 36° C. If we look for the steady state temperature it is described by Laplace's equation,

$$\nabla^2 u(r, \theta) = 0. \quad (11.1)$$

Expressing the Laplacian ∇^2 in spherical coordinates (see chapter 7) we find

$$\frac{1}{r^2} \frac{\partial}{\partial r} \left(r^2 \frac{\partial u}{\partial r} \right) + \frac{1}{r^2 \sin \theta} \frac{\partial}{\partial \theta} \left(\sin \theta \frac{\partial u}{\partial \theta} \right) = 0. \quad (11.2)$$

Once again we solve the equation by separation of variables,

$$u(r, \theta) = R(r)T(\theta). \quad (11.3)$$

After this substitution we realize that

$$\frac{[r^2 R']'}{R} = -\frac{[\sin \theta T']'}{T \sin \theta} = \lambda. \quad (11.4)$$

The equation for R will be shown to be easy to solve (later). The one for T is of much more interest. Since for 3D problems the angular dependence is more complicated, whereas in 2D the angular functions were just sines and cosines.

The equation for T is

$$[\sin \theta T']' + \lambda T \sin \theta = 0. \quad (11.5)$$

This equation is called Legendre's equation, or actually it carries that name after changing variables to $x = \cos \theta$. Since θ runs from 0 to π , we find $\sin \theta > 0$, and we have

$$\sin \theta = \sqrt{1 - x^2}. \quad (11.6)$$

After this substitution we are making the change of variables we find the equation ($y(x) = T(\theta) = T(\arccos x)$), and we now differentiate w.r.t. x , $d/d\theta = -\sqrt{1-x^2}d/dx$

$$\frac{d}{dx} \left[(1-x^2) \frac{dy}{dx} \right] + \lambda y = 0. \quad (11.7)$$

This equation is easily seen to be self-adjoint. It is not very hard to show that $x = 0$ is a regular (not singular) point – but the equation is singular at $x = \pm 1$. Near $x = 0$ we can solve it by straightforward substitution of a Taylor series,

$$y(x) = \sum_{j=0}^{\infty} a_j x^j. \quad (11.8)$$

We find the equation

$$\sum_{j=0}^{\infty} j(j-1)a_j x^{j-2} - \sum_{j=0}^{\infty} j(j-1)a_j x^j - 2 \sum_{j=0}^{\infty} j a_j x^j + \lambda \sum_{j=0}^{\infty} a_j x^j = 0 \quad (11.9)$$

After introducing the new variable $i = j - 2$, we have

$$\sum_{j=0}^{\infty} (i+1)(i+1)a_{i+2} x^i - \sum_{j=0}^{\infty} [j(j+1) - \lambda] a_j x^j = 0. \quad (11.10)$$

Collecting the terms of the order x^k , we find the recurrence relation

$$a_{k+2} = \frac{k(k+1) - \lambda}{(k+1)(k+2)} a_k. \quad (11.11)$$

If $\lambda = n(n+1)$ this series terminates – actually those are the only acceptable solutions, any one where λ takes a different value actually diverges at $x = +1$ or $x = -1$, not acceptable for a physical quantity – it can't just diverge at the north or south pole ($x = \cos \theta = \pm 1$ are the north and south pole of a sphere).

We thus have, for n even,

$$y_n = a_0 + a_2x^2 + \dots + a_nx^n. \quad (11.12)$$

For odd n we find odd polynomials,

$$y_n = a_1x + a_3x^3 + \dots + a_nx^n. \quad (11.13)$$

One conventionally defines

$$a_n = \frac{(2n)!}{n!2^{2n}}. \quad (11.14)$$

With this definition we obtain

$$\begin{aligned} P_0 &= 1, & P_1 &= x, \\ P_2 &= \frac{3}{2}x^2 - \frac{1}{2}, & P_3 &= \frac{1}{2}(5x^3 - 3x), \\ P_4 &= \frac{1}{8}(35x^4 - 30x^2 + 3), & P_5 &= \frac{1}{8}(63x^5 - 70x^3 + 15x). \end{aligned} \quad (11.15)$$

A graph of these polynomials can be found in figure 11.2.

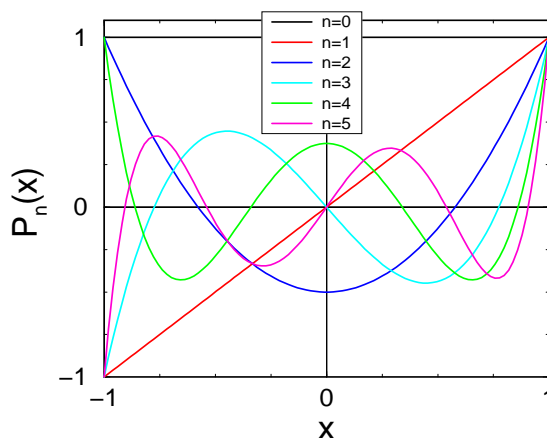


Figure 11.2: The first few Legendre polynomials $P_n(x)$.

11.2 Properties of Legendre polynomials

11.2.1 Generating function

Let $F(x, t)$ be a function of the two variables x and t that can be expressed as a Taylor's series in t , $\sum_n c_n(x)t^n$. The function F is then called a generating function of the functions c_n .

Example 11.1:

Show that $F(x, t) = \frac{1}{1-xt}$ is a generating function of the polynomials x^n .

Solution:

Look at

$$\frac{1}{1-xt} = \sum_{n=0}^{\infty} x^n t^n \quad (|xt| < 1). \quad (11.16)$$

Example 11.2:

Show that $F(x, t) = \exp\left(\frac{tx-t}{2t}\right)$ is the generating function for the Bessel functions,

$$F(x, t) = \exp\left(\frac{tx-t}{2t}\right) = \sum_{n=0}^{\infty} J_n(x)t^n. \quad (11.17)$$

Example 11.3:

(The case of most interest here)

$$F(x, t) = \frac{1}{\sqrt{1-2xt+t^2}} = \sum_{n=0}^{\infty} P_n(x)t^n. \quad (11.18)$$

11.2.2 Rodrigues' Formula

$$P_n(x) = \frac{1}{2^n n!} \frac{d^n}{dx^n} (x^2 - 1)^n. \quad (11.19)$$

11.2.3 A table of properties

1. $P_n(x)$ is even or odd if n is even or odd.
2. $P_n(1) = 1$.
3. $P_n(-1) = (-1)^n$.
4. $(2n+1)P_n(x) = P'_{n+1}(x) - P'_{n-1}(x)$.
5. $(2n+1)xP_n(x) = (n+1)P_{n+1}(x) + nP_{n-1}(x)$.
6. $\int_{-1}^x P_n(x')dx' = \frac{1}{2n+1} [P_{n+1}(x) - P_{n-1}(x)]$.

Let us prove some of these relations, first Rodrigues' formula. We start from the simple formula

$$(x^2 - 1) \frac{d}{dx} (x^2 - 1)^n - 2nx(x^2 - 1)^n = 0, \quad (11.20)$$

which is easily proven by explicit differentiation. This is then differentiated $n+1$ times,

$$\begin{aligned} & \frac{d^{n+1}}{dx^{n+1}} \left[(x^2 - 1) \frac{d}{dx} (x^2 - 1)^n - 2nx(x^2 - 1)^n \right] \\ &= n(n+1) \frac{d^n}{dx^n} (x^2 - 1)^n + 2(n+1)x \frac{d^{n+1}}{dx^{n+1}} (x^2 - 1)^n + (x^2 - 1) \frac{d^{n+2}}{dx^{n+2}} (x^2 - 1)^n \\ & \quad - 2n(n+1) \frac{d^n}{dx^n} (x^2 - 1)^n - 2nx \frac{d^{n+1}}{dx^{n+1}} (x^2 - 1)^n \\ &= -n(n+1) \frac{d^n}{dx^n} (x^2 - 1)^n + 2x \frac{d^{n+1}}{dx^{n+1}} (x^2 - 1)^n + (x^2 - 1) \frac{d^{n+2}}{dx^{n+2}} (x^2 - 1)^n \\ &= - \left[\frac{d}{dx} (1-x^2) \frac{d}{dx} \left\{ \frac{d^n}{dx^n} (x^2 - 1)^n \right\} + n(n+1) \left\{ \frac{d^n}{dx^n} (x^2 - 1)^n \right\} \right] = 0. \end{aligned} \quad (11.21)$$

We have thus proven that $\frac{d^n}{dx^n} (x^2 - 1)^n$ satisfies Legendre's equation. The normalisation follows from the evaluation of the highest coefficient,

$$\frac{d^n}{dx^n} x^{2n} = \frac{2n!}{n!} x^n, \quad (11.22)$$

and thus we need to multiply the derivative with $\frac{1}{2^n n!}$ to get the properly normalised P_n .

Let's use the generating function to prove some of the other properties: 2.:

$$F(1, t) = \frac{1}{1-t} = \sum_n t^n \quad (11.23)$$

has all coefficients one, so $P_n(1) = 1$. Similarly for 3.:

$$F(-1, t) = \frac{1}{1+t} = \sum_n (-1)^n t^n. \quad (11.24)$$

Property 5. can be found by differentiating the generating function with respect to t :

$$\begin{aligned} \frac{d}{dt} \frac{1}{\sqrt{1-2tx+t^2}} &= \frac{d}{dt} \sum_{n=0}^{\infty} t^n P_n(x) \\ \frac{x-t}{(1-2tx+t^2)^{3/2}} &= \sum_{n=0}^{\infty} nt^{n-1} P_n(x) \\ \frac{x-t}{1-2tx+t^2} \sum_{n=0}^{\infty} t^n P_n(x) &= \sum_{n=0}^{\infty} nt^{n-1} P_n(x) \\ \sum_{n=0}^{\infty} t^n x P_n(x) - \sum_{n=0}^{\infty} t^{n+1} P_n(x) &= \sum_{n=0}^{\infty} nt^{n-1} P_n(x) - 2 \sum_{n=0}^{\infty} nt^n x P_n(x) + \sum_{n=0}^{\infty} nt^{n+1} P_n(x) \\ \sum_{n=0}^{\infty} t^n (2n+1)x P_n(x) &= \sum_{n=0}^{\infty} (n+1)t^n P_{n+1}(x) + \sum_{n=0}^{\infty} nt^n P_{n-1}(x) \end{aligned} \quad (11.25)$$

Equating terms with identical powers of t we find

$$(2n+1)xP_n(x) = (n+1)P_{n+1}(x) + nP_{n-1}(x). \quad (11.26)$$

Proofs for the other properties can be found using similar methods.

11.3 Fourier-Legendre series

Since Legendre's equation is self-adjoint, we can show that $P_n(x)$ forms an orthogonal set of functions. To decompose functions as series in Legendre polynomials we shall need the integrals

$$\int_{-1}^1 P_n^2(x) dx = \frac{2n+1}{2}, \quad (11.27)$$

which can be determined using the relation 5. twice to obtain a recurrence relation

$$\begin{aligned} \int_{-1}^1 P_n^2(x) dx &= \int_{-1}^1 P_n(x) \frac{(2n-1)xP_{n-1}(x) - (n-1)P_{n-2}(x)}{n} dx \\ &= \frac{(2n-1)}{n} \int_{-1}^1 x P_n(x) P_{n-1}(x) dx \\ &= \frac{(2n-1)}{n} \int_{-1}^1 \frac{(n+1)P_{n+1}(x) + nP_{n-1}(x)}{2n+1} P_{n-1}(x) dx \\ &= \frac{(2n-1)}{2n+1} \int_{-1}^1 P_{n-1}^2(x) dx, \end{aligned} \quad (11.28)$$

and the use of a very simple integral to fix this number for $n = 0$,

$$\int_{-1}^1 P_0^2(x) dx = 2. \quad (11.29)$$

So we can now develop any function on $[-1, 1]$ in a Fourier-Legendre series

$$\begin{aligned} f(x) &= \sum_n A_n P_n(x) \\ A_n &= \frac{2n+1}{2} \int_{-1}^1 f(x) P_n(x) dx \end{aligned} \quad (11.30)$$

Example 11.4:

Find the Fourier-Legendre series for

$$f(x) = \begin{cases} 0, & -1 < x < 0 \\ 1, & 0 < x < 1 \end{cases}. \quad (11.31)$$

Solution:

We find

$$A_0 = \frac{1}{2} \int_0^1 P_0(x) dx = \frac{1}{2}, \quad (11.32)$$

$$A_1 = \frac{3}{2} \int_0^1 P_1(x) dx = \frac{1}{4}, \quad (11.33)$$

$$A_2 = \frac{5}{2} \int_0^1 P_2(x) dx = 0, \quad (11.34)$$

$$A_3 = \frac{7}{2} \int_0^1 P_3(x) dx = -\frac{7}{16}. \quad (11.35)$$

All other coefficients for even n are zero, for odd n they can be evaluated explicitly.

11.4 Modelling the eye—revisited

Let me return to my model of the eye. With the functions $P_n(\cos \theta)$ as the solution to the angular equation, we find that the solutions to the radial equation are

$$R = Ar^n + Br^{-n-1}. \quad (11.36)$$

The singular part is not acceptable, so once again we find that the solution takes the form

$$u(r, \theta) = \sum_{n=0}^{\infty} A_n r^n P_n(\cos \theta) \quad (11.37)$$

We now need to impose the boundary condition that the temperature is 20°C in an opening angle of 45° , and 36° elsewhere. This leads to the equation

$$\sum_{n=0}^{\infty} A_n r^n P_n(\cos \theta) = \begin{cases} 20 & 0 < \theta < \pi/4 \\ 36 & \pi/4 < \theta < \pi \end{cases} \quad (11.38)$$

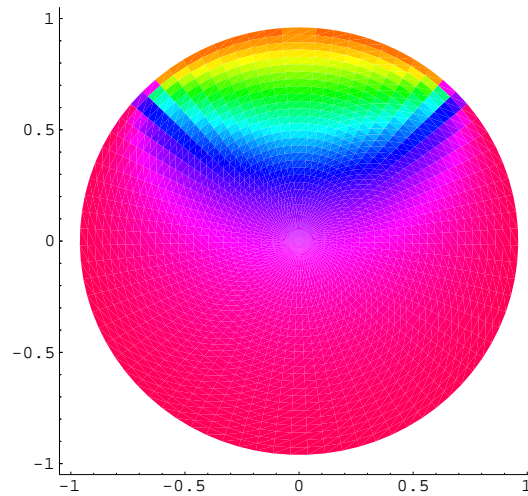


Figure 11.3: A cross-section of the temperature in the eye. We have summed over the first 40 Legendre polynomials.

This leads to the integral, after once again changing to $x = \cos \theta$,

$$A_n = \frac{2n+1}{2} \left[\int_{-1}^1 36P_n(x)dx - \int_{\frac{1}{2}\sqrt{2}}^1 16P_n(x)dx \right]. \quad (11.39)$$

These integrals can easily be evaluated, and a sketch for the temperature can be found in figure 11.3.

Notice that we need to integrate over $x = \cos \theta$ to obtain the coefficients A_n . The integration over θ in spherical coordinates is $\int_0^\pi \sin \theta d\theta = \int_{-1}^1 1dx$, and so automatically implies that $\cos \theta$ is the right variable to use, as also follows from the orthogonality of $P_n(x)$.